

10

Circles

EXERCISE 10.1

1. AD is a diameter of a circle and AB is a chord. If AD = 34 cm, AB = 30 cm, the distance of AB from the centre of the circle is

(a) 17 cm (b) 15 cm (c) 4 cm (d) 8 cm.

Sol. Draw $OP \perp AB$.

As perpendicular from the centre to a chord bisects the chord, so

$$AP = \frac{1}{2} \times AB = \frac{1}{2} \times 30 = 15 \text{ cm}$$

$$\text{Radius } OA = \frac{1}{2} \times 34 = 17 \text{ cm}$$

In right $\triangle OPA$, we have

$$\begin{aligned} OP &= \sqrt{OA^2 - AP^2} = \sqrt{(17)^2 - (15)^2} \\ &= \sqrt{289 - 225} = \sqrt{64} = 8 \text{ cm} \end{aligned}$$

Hence, (d) is the correct answer.

2. In the given figure, if OA = 5 cm, AB = 8 cm and OD is perpendicular to AB, then CD is equal to

(a) 2 cm (b) 3 cm
(c) 4 cm (d) 5 cm

Sol. As perpendicular from the centre to a chord bisects the chord,

$$AC = \frac{1}{2} \times AB = \frac{1}{2} \times 8 = 4 \text{ cm}$$

$$OC = \sqrt{OA^2 - AC^2} = \sqrt{25 - 16} = \sqrt{9}$$

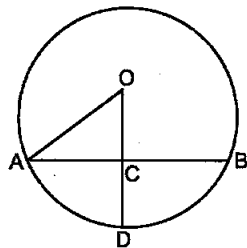
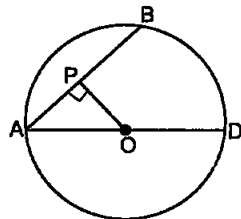
$$OC = 3 \text{ cm}$$

$$\begin{aligned} \text{Now, } CD &= OD - OC \\ &= 5 \text{ cm} - 3 \text{ cm} = 2 \text{ cm} \end{aligned}$$

Hence, (c) is the correct answer.

3. If AB = 12 cm, BC = 16 cm and AB is perpendicular to BC, then the radius of the circle, passing through the points A, B, and C is:

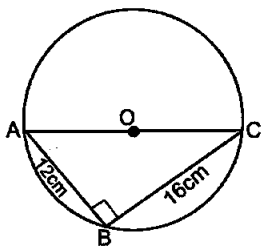
(a) 6 cm (b) 8 cm
(c) 10 cm (d) 12 cm



Sol. AB is perpendicular to BC, therefore ABC is a right triangle.

In right $\triangle ABC$, we have

$$\begin{aligned} AC &= \sqrt{AB^2 + BC^2} \\ &= \sqrt{(12)^2 + (16)^2} \\ &= \sqrt{144 + 256} \\ &= \sqrt{400} = 20 \text{ cm} \end{aligned}$$



$$\therefore \text{Radius} = \frac{1}{2} \times \text{diameter} = \frac{1}{2} \times 20 \text{ cm} = 10 \text{ cm}$$

Hence, (c) is the correct answer.

4. In the given figure, if $\angle ABC = 20^\circ$, then $\angle AOC$ is equal to:

- (a) 20° (b) 40°
(c) 60° (d) 10°

Sol. Arc AC of a circle subtends $\angle AOC$ at the centre O and $\angle ABC$ at a point B on the remaining part of the circle,

$$\begin{aligned} \therefore \angle AOC &= 2\angle ABC \\ &= 2 \times 20^\circ = 40^\circ \end{aligned}$$

Hence, (b) is the correct answer.

5. In the given fig., if AOB is a diameter of the circle and $AC = BC$, $\angle CAB$ is equal to:

- (a) 30° (b) 60°
(c) 90° (d) 45°

Sol. As AOB is a diameter of the circle, $\angle C = 90^\circ$

[\because Angle in a semi-circle is 90°]

Now, $AC = BC$

$\therefore \angle A = \angle B$

[\because Angles opposite to equal sides of a triangle are equal]

$$\begin{aligned} \angle A + \angle B + \angle C &= 180^\circ \Rightarrow 2\angle A + 90^\circ = 180^\circ \\ \Rightarrow 2\angle A &= 90^\circ \Rightarrow \angle A = 90^\circ \div 2 = 45^\circ \end{aligned}$$

Hence, (d) is the correct answer.

6. In the given figure, if $\angle OAB = 40^\circ$, then $\angle ACB$ is equal to:

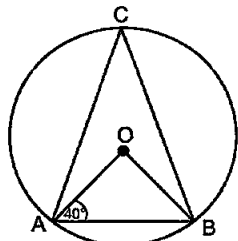
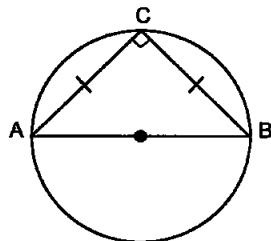
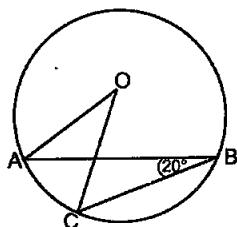
- (a) 50° (b) 40°
(c) 60° (d) 70°

Sol. In $\triangle OAB$,

$OA = OB$ [Radii of a circle]

$\therefore \angle OAB = \angle OBA = 40^\circ$

[\because Angles opposite to equal sides are equal]



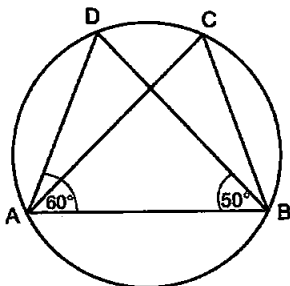
So, $\angle AOB = 180^\circ - (40^\circ + 40^\circ) = 100^\circ$

$\therefore \angle ACB = \frac{1}{2} \angle AOB = \frac{1}{2} \times 100^\circ = 50^\circ$

Hence, (a) is the correct answer.

7. In the given figure, if $\angle DAB = 60^\circ$, $\angle ABD = 50^\circ$, then $\angle ACB$ is equal to:

- (a) 60° (b) 50°
(c) 70° (d) 80°



Sol. In $\triangle ADB$, we have

$\angle A + \angle B + \angle D = 180^\circ$

$\Rightarrow 60^\circ + 50^\circ + \angle D = 180^\circ$

$\Rightarrow \angle D = 180^\circ - 110^\circ = 70^\circ$

i.e. $\angle ADB = 70^\circ$

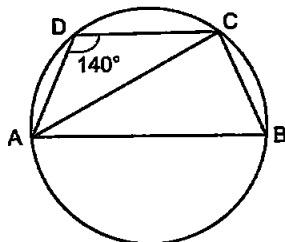
Now, $\angle ACB = \angle ADB = 70^\circ$

[\because Angles in the same segment of a circle are equal]

Hence, (c) is the correct answer.

8. ABCD is a cyclic quadrilateral such that AB is a diameter of the circle circumscribing it and $\angle ADC = 140^\circ$, then $\angle BAC$ is equal to:

- (a) 80° (b) 50°
(c) 40° (d) 30°



Sol. $\angle ADC + \angle ABC = 180^\circ$

$\Rightarrow 140^\circ + \angle ABC = 180^\circ$

$\therefore \angle ABC = 180^\circ - 140^\circ = 40^\circ$

ABCD is a cyclic quadrilateral such that AB is the diameter of the circle circumscribing it.

Now, join AC. $\angle C = 90^\circ$

[\because Angle in a semi-circle is a right angle]

In $\triangle ABC$, we have

$\angle BAC = 180^\circ - (90^\circ + 40^\circ)$
 $= 50^\circ$

Hence, (b) is the correct answer.

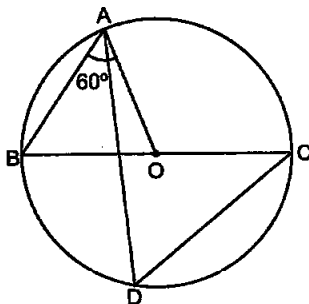
9. In the given figure, BC is a diameter of the circle and $\angle BAO = 60^\circ$. Then $\angle ADC$ is equal to:

- (a) 30° (b) 45°
(c) 60° (d) 120°

Sol. In $\triangle OAB$, we have

$OA = OB$ [Radii of the same circle]

$\therefore \angle ABO = \angle BAO$ [Angle opp. to equal sides are equal]



$$\therefore \angle ABO = \angle BAO = 60^\circ \quad [\text{Given}]$$

$$\text{Now, } \angle ADC = \angle ABC = 60^\circ$$

$[\because \angle ABC$ and $\angle ADC$ are angles in the same segment of a circle, are equal]

Hence, $\angle ADC = 60^\circ$, so (c) is the correct answer.

10. In the given figure, if $\angle AOB = 90^\circ$,
 $\angle ABC = 30^\circ$, then $\angle CAO$ is equal to:

- (a) 30° (b) 45°
 (c) 90° (d) 60°

Sol. In $\triangle OAB$, we have

$$OA = OB$$

[Radii of the same circle]

$$\therefore \angle OAB = \angle OBA$$

$$\therefore 2\angle OAB = (180^\circ - \angle AOB)$$

$$= (180^\circ - 90^\circ) [\because \text{Sum}$$

of angles of \triangle is $180^\circ]$

$$\Rightarrow \angle OAB = \frac{1}{2} \times 90^\circ = 45^\circ$$

$$\text{Also, } \angle ACB = \frac{1}{2} \angle AOB = \frac{1}{2} \times 90^\circ = 45^\circ$$

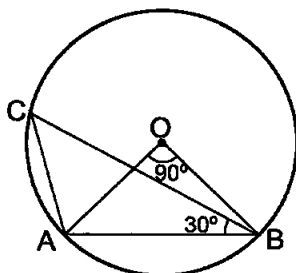
Now, in $\triangle CAB$, we have

$$\begin{aligned} \angle CAB &= 180^\circ - (\angle ABC + \angle ACB) \\ &= 180^\circ - (30^\circ + 45^\circ) = 105^\circ \end{aligned}$$

$$\text{Now, } \angle CAO = \angle CAB - \angle OAB$$

$$\Rightarrow \angle CAO = 105^\circ - 45^\circ = 60^\circ$$

Hence, (d) is the correct answer.



EXERCISE 10.2

Write true or false and justify your answer in each of the following:

1. Two chords AB and CD of a circle are each at distances 4 cm from the centre. Then $AB = CD$.

Sol. We know that chords equidistant from the centre of a circle are equal. Here we are given that two chords AB and CD of a circle are each at distance 4 cm (equidistant) from the centre of a circle. So, chords are equal, i.e., $AB = CD$.

Hence, the given statement is true.

2. Two chords AB and AC of a circle with centre O are on the opposite sides of OA. Then $\angle OAB = \angle OAC$.

Sol. The given statement is false, because the angles will be equal if $AB = AC$.

3. Two congruent circles with centres O and O' intersect at two points A and B. Then $\angle AOB = \angle AO'B$.

Sol. The given statement is true because equal chords of congruent circles subtend equal angles at the respective centres.

4. Through three collinear points a circle can be drawn.

Sol. The given statement is false because a circle through two points cannot pass through a point which is collinear to these two points.

5. A circle of radius 3 cm can be drawn through two points A, B such that $AB = 6$ cm.

Sol. Radius of circle = 3 cm,

$$\therefore \text{Diameter of circle} = 2 \times r = 2 \times 3 \text{ cm} = 6 \text{ cm}$$

Now, $AB = 6$ cm, so the given statement is true because AB will be the diameter.

6. If AOB is a diameter of a circle and C is a point on the circle, then $AC^2 + BC^2 = AB^2$.

Sol. AOB is a diameter of a circle and C is a point on the circle.

$$\therefore \angle ACB = 90^\circ \quad [\because \text{Angle in a semicircle is a right angle}]$$

In right $\triangle ABC$,

$$AC^2 + BC^2 = AB^2 \quad \text{[By Pythagoras theorem]}$$

Hence, the given statement is true.

7. ABCD is a cyclic quadrilateral such that $\angle A = 90^\circ$, $\angle B = 70^\circ$, $\angle C = 95^\circ$ and $\angle D = 105^\circ$.

Sol. We know that opposite angles of a cyclic quadrilateral are supplementary.

Here, sum of opposite angles is not 180°

$$\angle A + \angle C = 90^\circ + 95^\circ = 185^\circ$$

Hence, ABCD is not a cyclic quadrilateral. The given statement is false.

8. If A, B, C and D are four point such that $\angle BAC = 30^\circ$ and $\angle BDC = 60^\circ$, then D is the centre of the circle through A, B and C.

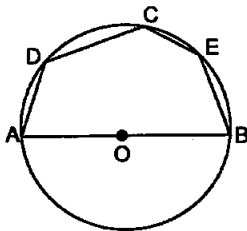
Sol. The given statement is false because there can be many points D such that $\angle BDC = 60^\circ$ and each such point cannot be centre of the circle through A, B, C.

9. If A, B, C and D are four points such that $\angle BAC = 45^\circ$ and $\angle BDC = 45^\circ$, then A, B, C, D are concyclic.

Sol. The given statement is true, because the two angles $\angle BAC = 45^\circ$ and $\angle BDC = 45^\circ$ are in the same segment of a circle.

Hence, A, B, C and D are concyclic.

10. In the given figure, if AOB is a diameter and $\angle ADC = 120^\circ$, then $\angle CAB = 30^\circ$.



Sol. AOB is a diameter of circle with centre O.

$$\angle ADC + \angle ABC = 180^\circ$$

[\because ABCD is a cyclic quadrilateral]

$$\Rightarrow 120^\circ + \angle ABC = 180^\circ$$

$$\Rightarrow \angle ABC = 180^\circ - 120^\circ = 60^\circ$$

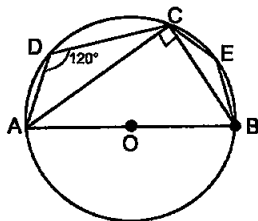
In ΔABC , we have

$$\angle ACB = 90^\circ$$

[\because Angle in a semicircle and $\angle ABC = 60^\circ$ (Proved above)]

$$\therefore \angle CAB = 180^\circ - (90^\circ + 60^\circ) = 30^\circ$$

Hence, the given statement is true.

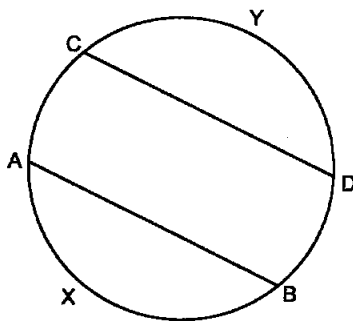


EXERCISE 10.3

1. If arcs AXB and CYD of a circle are congruent, find the ratio of chord AB and chord CD.

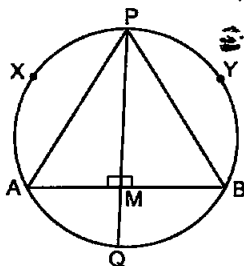
Sol. We have $\widehat{AXB} \cong \widehat{CYD}$

Since if two arcs of a circle are congruent, then their corresponding arcs are equal, so we have chord $AB =$ chord CD
Hence, $AB : CD = 1 : 1$



2. If PQ is the perpendicular bisector of a chord AB of a circle PXAQBY intersects the circle at P and Q, prove that arc $PXA \cong$ arc PYB .

Sol. As PQ is the perpendicular bisector of AB,



so $AM = BM$

In $\triangle APM$ and $\triangle BPM$, we have

$AM = BM$

$\angle AMP = \angle BMP$

$PM = PM$

$\therefore \triangle APM \cong \triangle BPM$

so $AP = BP$

Hence, $\text{arc } PXA \cong \text{arc } PYB$

[If two chords of a circle are equal, then their corresponding arcs are congruent]

[Proved above]

[Each = 90°]

[Common side]

[By SAS congruence rule]

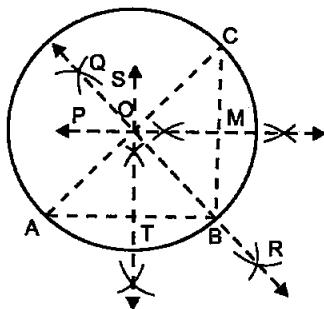
[CPCT]

3. A, B and C are three points on a circle. Prove that the perpendicular bisectors of AB, BC and CA are concurrent.

Sol. Given: Three non-collinear points A, B and C are on a circle.

To prove: Perpendicular bisectors of AB, BC and CA are concurrent.

Construction: Join AB, BC and CA. Draw perpendicular bisectors ST of AB, PM of BC and QR of CA respectively. As point A, B, C are not collinear, so ST, PM and QR are not parallel and will intersect.



Proof: \because O lies on ST, the \perp bisector of AB

$\therefore OA = OB$... (1)

Similarly, O lies on PM, the \perp bisector of BC

$\therefore OB = OC$... (2)

And, O lies on QR, the \perp bisector of CA

$\therefore OC = OA$... (3)

From (1), (2) and (3), $OA = OB = OC = r$ (say)

With O as a centre and r as the radius, draw circle $C(O, r)$ which will pass through A, B and C.

This proves that there is a circle passing through the points A, B and C.

Since ST, PM and QR can cut each other at one and only one point O.

\therefore O is the only point equidistant from A, B and C.

Hence, the perpendicular bisectors of AB, BC and CA are concurrent.

4. AB and AC are two equal chords of a circle. Prove that the bisector of the angle BAC passes through the centre of the circle.

Sol. Given: AB and AC are two chords which are equal with centre O. AM is the bisector of $\angle BAC$.

To prove: AM passes through O.

Construction: Join BC. Let AM intersect BC at P.

Proof: In $\triangle BAP$ and $\triangle CAP$,

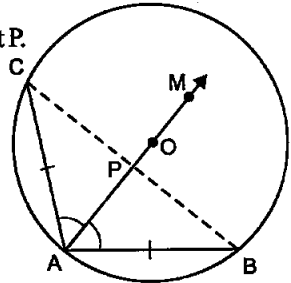
$AB = AC$ [Given]
 $\angle BAP = \angle CAP$ [Given]
 and $AP = AP$ [Common side]
 $\therefore \triangle BAP \cong \triangle CAP$ [By SAS]
 $\therefore \angle BPA = \angle CPA$ [CPCT]
 and $CP = PB$

But $\angle BPA + \angle CPA = 180^\circ$ [Linear pair $\angle s$]

$\therefore \angle BPA = \angle CPA = 90^\circ$

$\therefore AP$ is perpendicular bisector of the chord BC, which will pass through the centre O on being produced.

Hence, AM passes through O.



5. If a line segment joining mid-point of two chords of a circle passes through the centre of the circle, prove that the two chords parallel.

Sol. Given: AB and CD are two chords of a circle whose centre is O. The mid-points of AB and CD are L and M respectively.

To prove: $AB \parallel CD$

Proof: \because L is the mid-point of chord AB

$\therefore OL \perp AB$, or $\angle ALO = 90^\circ$

[\because The line joining the centre of a circle to the mid-point of a chord is perpendicular to the chord]

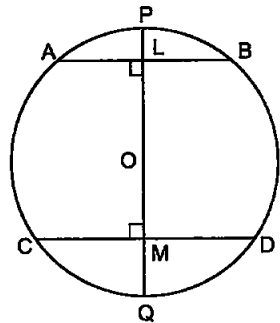
Similarly, $\angle CMO = 90^\circ$

$\therefore \angle ALO = \angle CMO$

But, these are corresponding angles.

So, $AB \parallel CD$.

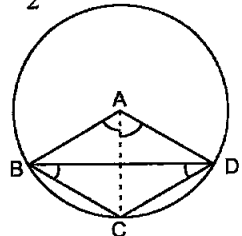
Hence, proved.



6. ABCD is such a quadrilateral that A is the centre of the circle passing through B, C and D. Prove that $\angle CBD + \angle CDB = \frac{1}{2} \angle BAD$.

Sol. ABCD is such a quadrilateral that A is the centre of the circle passing through B, C and D. We have to prove that

$$\angle CBD + \angle CDB = \frac{1}{2} \angle BAD$$



Join AC.

Since angle subtended by an arc at the centre is double the angle subtended by it at point on the remaining part of the circle .

Therefore, $\angle CAD = 2\angle CBD$... (1)

and $\angle BAC = 2\angle CDB$... (2)

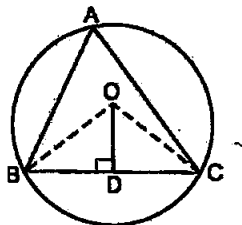
Adding (1) and (2), we get

$$\angle CAD + \angle BAC = 2(\angle CBD + \angle CDB)$$

$$\Rightarrow \angle BAD = 2(\angle CBD + \angle CDB)$$

Hence, $\angle CBD + \angle CDB = \frac{1}{2} \angle BAD$

7. O is the circumcentre of the triangle ABC and D is the mid-point of the base BC. Prove that $\angle BOD = \angle A$.



Sol. Given: O is the circumcentre of $\triangle ABC$ and $OD \perp BC$.

To prove: $\angle BOD = \angle A$.

Construction: Join OB and OC.

Proof: In $\triangle OBD$ and $\triangle OCD$, we have

| | |
|---------------------------|--|
| $OB = OC$ | [Each equal to the radius of the circumcircle] |
| $\angle ODB = \angle ODC$ | [Each equal to 90°] |
| $OD = OD$ | [Common] |

$\therefore \angle OBD \cong \angle OCD$
 $\Rightarrow \angle BOC = 2\angle BOD = 2\angle COD$

Now, arc BC subtends $\angle BOC$ at the centre and $\angle BAC = \angle A$ at a point in the remaining part of the circle.

$\therefore \angle BOC = 2\angle A$
 $\Rightarrow 2\angle BOD = 2\angle A$ [$\because \angle BOC = 2\angle BOD$]
 $\Rightarrow \angle BOD = \angle A$

Hence, proved.

8. On a common hypotenuse AB, two right triangles ACB and ADB are situated on opposite sides. Prove that $\angle BAC = \angle BDC$.

Sol. In right triangles ACB and ADB, we have

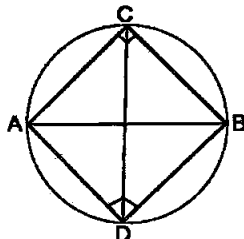
$\angle ACB = 90^\circ$ and $\angle ADB = 90^\circ$

$\therefore \angle ACB + \angle ADB = 90^\circ + 90^\circ = 180^\circ$

If the sum of any pair of opposite angles of a quadrilateral is 180° , then the quadrilateral is cyclic. So, ADBC is a cyclic quadrilateral.

Join CD. Angles $\angle BAC$ and $\angle BDC$ are made by

\widehat{BC} in the same segment BDAC.

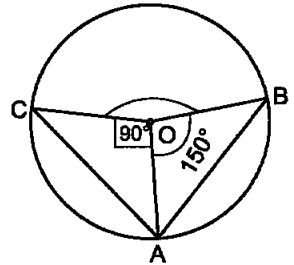


Hence, $\angle BAC = \angle BDC$.

[\because Angles in the same segment of a circle are equal]

9. Two chords AB and AC of a circle subtends angles equal to 90° and 150° , respectively at the centre.

Find $\angle BAC$, if AB and AC lie on the opposite sides of the centre.



Sol. We have

$$\text{Reflex } \angle BOC = 90^\circ + 150^\circ = 240^\circ$$

$$\therefore \angle BOC = 360^\circ - 240^\circ = 120^\circ$$

$$\text{Now, } \angle BOC = 2\angle BAC$$

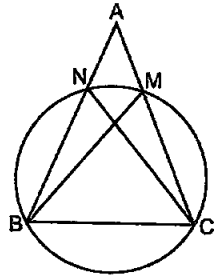
$$\text{Hence, } \angle BAC = \frac{1}{2} \angle BOC = \frac{1}{2} \times 120^\circ = 60^\circ$$

10. If BM and CN are the perpendiculars drawn on the sides AC and AB of the triangle ABC, prove that the points B, C, M and N are concyclic.

Sol. As BM and CN are the perpendiculars drawn on the sides AC and AB of the triangle ABC

$$\therefore \angle BMC = \angle BNC = 90^\circ$$

Since if a line segment (here BC) joining two points (here B and C) subtends equal angles (here $\angle BMC$ and $\angle BNC$) at M and N on the same side of the line (here BC) containing the segment, the four points (here B, C, M and N) are concyclic.



Hence B, C, M and N are concyclic.

11. If a line is drawn parallel to the base of an isosceles triangle to intersect its equal sides, prove that quadrilateral so formed is cyclic.

Sol. $\triangle ABC$ is an isosceles triangle in which $AB = AC$. DE is drawn parallel to BC. We have to prove that quadrilateral BCED is a cyclic quadrilateral i.e., point B, C, E and D lie on a circle.

In $\triangle ABC$, we have

$$AB = AC \quad [\text{Given}]$$

$$\therefore \angle 1 = \angle 2 \quad [\because \text{Angles opp. to equal sides are equal}]$$

Now, $DE \parallel BC$ and AB cuts them,

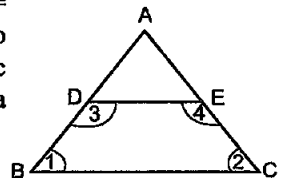
$$\therefore \angle 1 + \angle 3 = 180^\circ$$

$$[\because \text{Sum of int. } \angle s \text{ on the same side of the transversal}]$$

$$\Rightarrow \angle 2 + \angle 3 = 180^\circ$$

$$[\because \angle 1 = \angle 2]$$

Similarly, we can show that $\angle 1 + \angle 4 = 180^\circ$

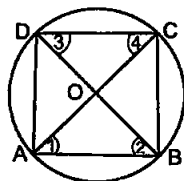


Since if pair of opposite angles of a quadrilateral is supplementary, then the quadrilateral is cyclic.

Hence, BCED is a cyclic quadrilateral.

12. If a pair of opposite sides of a cyclic quadrilateral are equal, prove that its diagonals are also equal.

Sol. ABCD is cyclic quadrilateral in which one pair of opposite sides $AB = DC$. We have to prove that diagonal $AC =$ diagonal BD .



In $\triangle AOB$ and $\triangle DOC$, we have

$$\angle 1 = \angle 3$$

[Angles in the same segment of the circle are equal]

$$AB = DC$$

[Given]

Also,

$$\angle 2 = \angle 4$$

[Same reason as in step - 1]

$$\therefore \triangle AOB \cong \triangle DOC$$

[By ASA congruence rule]

$$\therefore AO = OD \text{ [CPCT]}$$

...(1)

$$\text{and } OC = BO$$

...(2)

Now, adding (1) and (2), we get

$$AO + OC = BO + OD$$

$$\Rightarrow AC = BD$$

Hence, proved.

13. The circumcentre of the triangle ABC is O. Prove that $\angle OBC + \angle BAC = 90^\circ$

Sol. ABC is a triangle and O is its circumcentre.

Draw $OD \perp BC$. Join OB and OC.

In right $\triangle OBD$ and right $\triangle OCD$, we have

$$\text{hyp. } OB = \text{hyp. } OC$$

[Radii of the same circle]

$$OD = OD$$

[Common side]

$$\therefore \triangle OBD \cong \triangle OCD$$

[By RHS cong. rule]

$$\therefore \angle 1 = \angle 2 \text{ and } \angle 3 = \angle 4$$

[CPCT]

$$\text{Now, } \angle BOC = 2\angle 1 \text{ and } \angle BOC = 2\angle A$$

$$\therefore 2\angle 1 = 2\angle A \Rightarrow \angle 1 = \angle A$$

$$\therefore \angle A = \angle 2$$

...(1) [$\because \angle 1 = \angle 2$]

$$\Rightarrow \angle A + \angle 4 = \angle 2 + \angle 4$$

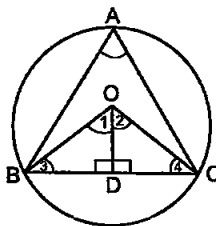
[Adding $\angle 4$ to both sides]

$$\Rightarrow \angle A + \angle 3 = 90^\circ$$

[$\because \angle 2 + \angle 4 = 90^\circ$ and $\angle 4 = \angle 3$]

$$\Rightarrow \angle OBC + \angle A = 90^\circ$$

Hence, proved.

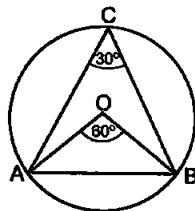


14. A chord of a circle is equal to its radius. Find the angle subtended by this chord at a point in major segment.

Sol. Since chord of a circle is equal to radius, so we have $AB = OA = OB$.

Therefore, ABC is an equilateral triangle.

Since each angle of an equilateral triangle is 60° , so we have $\angle AOB = 60^\circ$. Since angle subtended by an arc at the centre is double the angle subtended by it at any point on the remaining part of the circle, so we have



$$\angle AOB = 2\angle ACB$$

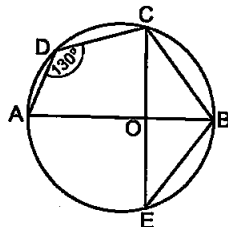
Hence,
$$\angle ACB = \frac{1}{2} \angle AOB = \frac{1}{2} \times 60^\circ = 30^\circ$$

15. In the given figure, $\angle ADC = 130^\circ$ and chord $BC =$ chord BE . Find $\angle CBE$.
Sol. In the given figure, we have $\angle ADC = 130^\circ$ and chord $BC =$ chord BE . We have to find $\angle CBE$. Since $ABCD$ is a cyclic quadrilateral and the opposite angles of a cyclic quadrilateral are supplementary.

$$\begin{aligned} \therefore \angle D + \angle ABC &= 180^\circ \\ \Rightarrow 130^\circ + \angle ABC &= 180^\circ \\ \Rightarrow \angle ABC &= 180^\circ - 130^\circ = 50^\circ \\ \Rightarrow \angle OBC &= 50^\circ \end{aligned} \quad \dots(1)$$

In $\triangle OBC$ and $\triangle OBE$, we have

$$\begin{aligned} BC &= BE && \text{[Given]} \\ OC &= OE && \text{[Radii of same circle]} \\ OB &= OB && \text{[Common side]} \\ \therefore \triangle OBC &\cong \triangle OBE && \text{[By SSS cong. rule]} \\ \therefore \angle OBC &= \angle OBE = 50^\circ && \text{[CPCT and by (1) } \angle OBC = 50^\circ] \\ \therefore \angle OBC + \angle OBE &= 50^\circ + 50^\circ = 100^\circ \end{aligned}$$



Hence, $\angle CBE = 100^\circ$.

16. In the given figure, $\angle ACB = 40^\circ$. Find $\angle OAB$.

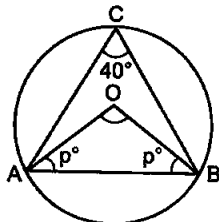
Sol. Since the angle subtended by an arc at the centre is double the angle subtended by it at any point on the remaining part of the circle, so we have

$$\angle AOB = 2\angle ACB = 2 \times 40^\circ = 80^\circ$$

So, in $\triangle OAB$, we have

$$\begin{aligned} p^\circ + p^\circ + \angle AOB &= 180^\circ \\ \Rightarrow 2p^\circ + 80^\circ &= 180^\circ \Rightarrow 2p^\circ = 180^\circ - 80^\circ \\ \Rightarrow 2p^\circ &= 100^\circ \Rightarrow p^\circ = 100^\circ \div 2 = 50^\circ \end{aligned}$$

Hence, $\angle OAB = 50^\circ$



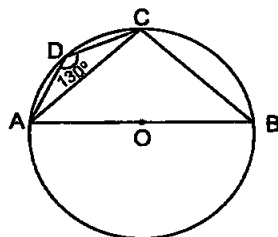
17. A quadrilateral $ABCD$ is inscribed in a circle such that AB is diameter and $\angle ADC = 130^\circ$. Find $\angle BAC$.

Sol. Since the opposite angles of a cyclic quadrilateral are supplementary.

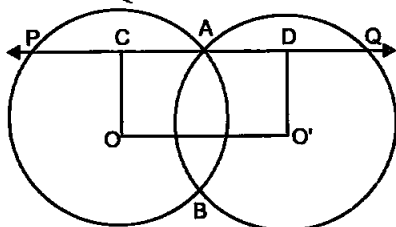
$$\begin{aligned} \therefore \angle B + \angle D &= 180^\circ \\ \Rightarrow \angle B + 130^\circ &= 180^\circ \end{aligned}$$

$\Rightarrow \angle B = 180^\circ - 130^\circ = 50^\circ$
 Now, in $\triangle ABC$, $\angle ACB = 90^\circ$ [\because Angle in a semi-circle = 90°]

and $\angle ABC = 50^\circ$
 $\therefore \angle BAC = 180^\circ - (90^\circ + 50^\circ)$
 $= 180^\circ - 140^\circ = 40^\circ$



18. Two circles with centre O and O' intersect at two points A and B. A line PQ is drawn parallel to OO' through A (or B) intersecting the circles at P and Q. Prove that $PQ = 2 OO'$



- Sol. Two circles with centre O and O' intersect at two points A and B. A line PQ is drawn parallel to OO' through A (or B) intersecting the circles at P and Q.

Draw $OC \perp PA$ and $O'D \perp AQ$.

We have to prove that $PQ = 2 OO'$.

Since perpendicular from the centre to a chord bisects the chord, so

$$PA = 2CA \quad \dots(1)$$

and $AQ = 2AD \quad \dots(2)$

Adding (1) and (2), we get

$$PA + AQ = 2CA + 2AD$$

$$\Rightarrow PQ = 2(CA + AD) = 2CD$$

Hence, $PQ = 2OO'$ [\because CD and OO' are opposite sides of a rectangle]

19. In the given figure, AOB is a diameter of the circle and C, D, E are any three points on the semi-circle. Find the value of $\angle ACD + \angle BED$.

Sol. Join BC.

Since angle in a semicircle is 90° , we have

$$\angle ACB = 90^\circ$$

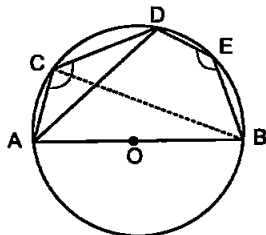
As BCDE is a cyclic quadrilateral and opposite angles of a cyclic quadrilateral are supplementary

$$\therefore \angle BCD + \angle BED = 180^\circ$$

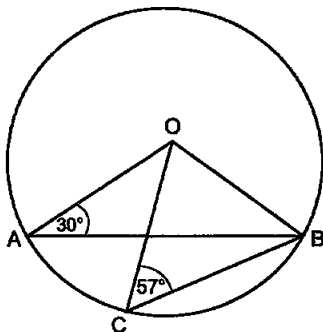
Now, adding $\angle ACB$ to both sides, we get

$$(\angle BCD + \angle ACB) + \angle BED = 180^\circ + \angle ACB$$

Hence, $\angle ACD + \angle BED = 180^\circ + 90^\circ = 270^\circ$



20. In the given figure, $\angle OAB = 30^\circ$ and $\angle OCB = 57^\circ$. Find $\angle BOC$ and $\angle AOC$.



Sol. In $\triangle OBC$, we have

$$OB = OC \quad [\text{Radii of the same circle}]$$

$$\therefore \angle OCB = \angle OBC = 57^\circ \quad [\because \angle OCB = 57^\circ (\text{Given})]$$

Now, in $\triangle OBC$, we have

$$\angle OCB + \angle OBC + \angle BOC = 180^\circ$$

$$\Rightarrow 57^\circ + 57^\circ + \angle BOC = 180^\circ$$

$$\Rightarrow 114^\circ + \angle BOC = 180^\circ$$

$$\Rightarrow \angle BOC = 180^\circ - 114^\circ = 66^\circ$$

Again, in $\triangle AOB$, we have

$$\angle OAB + \angle OBA + \angle AOB = 180^\circ$$

$$\Rightarrow 30^\circ + 30^\circ + (\angle AOC + \angle BOC) = 180^\circ$$

$$\Rightarrow 60^\circ + \angle AOC + 66^\circ = 180^\circ$$

$$\Rightarrow \angle AOC = 180^\circ - 126^\circ = 54^\circ$$

Hence, $\angle BOC = 66^\circ$ and $\angle AOC = 54^\circ$.

EXERCISE 10.4

1. If two equal chords of a circle intersect, prove that the parts of one chord are separately equal to the parts of the other chord.

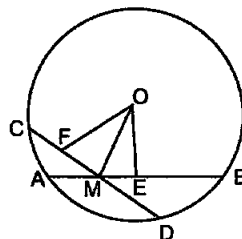
Sol. AB and CD are two equal chords of a circle with centre O, intersect each other at M.

We have to prove that,

(i) $MB = MC$ and

(ii) $AM = MD$

AB is a chord and $OE \perp$ to it from the centre O,



$$\therefore AE = \frac{1}{2} AB$$

[\because Perpendicular from the centre to a chord bisects the chord]

Similarly, $FD = \frac{1}{2} CD$

As $AB = CD \Rightarrow \frac{1}{2}AB = \frac{1}{2}CD$ [Given]

so $AE = FD$... (1)

Since equal chords are equidistant from the centre,

so $OE = OF$ [$\because AB = CD$]

Now, in right ΔMOE and MOF ,

hyp. $OE = \text{hyp. } OF$ [Proved above]

$OM = OM$ [Common side]

$\therefore \Delta MOE \cong \Delta MOF$

$\therefore ME = MF$... (2)

Subtracting (2) from (1), we get

$AE - ME = FD - MF$

$\Rightarrow AM = MD$ [Proved part (i)]

Again, $AB = CD$ [Given]

and $AM = MD$ [Proved]

$\therefore AB - AM = CD - MD$ [Equals subtracted from equal]

Hence, $MB = MC$ [Proved part (i)]

2. If non-parallel sides of a trapezium are equal, prove that it is cyclic.

Sol. Given: ABCD is a trapezium in which $AD \parallel BC$ and its non-parallel sides AB and DC are equal i.e.,

$AB = DC$.

To prove: Trapezium ABCD is cyclic.

Construction: Draw AM and DN \perp s on BC.

Proof: In right Δ s AMB and DNC,

$\angle AMB = \angle DNC$ [Each 90°]

$AB = DC$ [Given]

$AM = DN$

[\perp distance between two \parallel lines are same]

$\therefore \Delta AMB \cong \Delta DNC$ [By RHS congruence rule]

$\therefore \angle B = \angle C$ [CPCT]

and $\angle 1 = \angle 2$

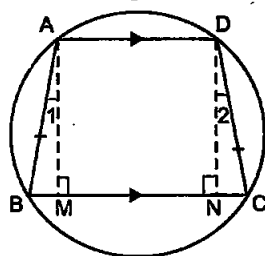
$\therefore \angle BAD = \angle 1 + 90^\circ$
 $= \angle 2 + 90^\circ$ [$\because \angle 1 = \angle 2$ (Proved above)]
 $= \angle CDA$

Now, in quadrilateral ABCD

$\angle B + \angle C + \angle CDA + \angle BAD = 360^\circ$

$\Rightarrow \angle B + \angle B + \angle CDA + \angle CDA = 360^\circ$

[$\because \angle B = \angle C$ and $\angle CDA = \angle BAD$ (Proved above)]



$$\Rightarrow 2(\angle B + \angle CDA) = 360^\circ$$

$$\Rightarrow \angle B + \angle CDA = 180^\circ$$

We know that if the sum of any pair of opposite angles of a quadrilateral is 180° , then the quadrilateral is cyclic.

Hence, the trapezium ABCD is cyclic.

3. If P, Q and R are the mid-points of the sides BC, CA and AB of a triangle and AD is the perpendicular from A to BC, prove that P, Q, R and D are concyclic.

Sol. We have to prove that R, D, P and Q are concyclic.

Join RD, QD, PR and PQ.

\therefore RP joins R and P, the mid-point of AB and BC.

\therefore RP \parallel AC [Mid-point theorem]

Similarly, PQ \parallel AB.

\therefore ARPQ is a \parallel gm

so $\angle RAQ = \angle RQP$ [Opposite angles of a \parallel gm]...(1)

\therefore ABD is a rt. \angle Δ and DR is a median,

\therefore RA = DR and $\angle 1 = \angle 2$... (2)

Similarly $\angle 3 = \angle 4$... (3)

Adding (2) and (3), we get

$$\angle 1 + \angle 3 = \angle 2 + \angle 4$$

$$\Rightarrow \angle RDQ = \angle RAQ$$

$$= \angle RQP$$

[Proved above]

Hence R, D, P and Q are concyclic.

[\therefore $\angle D$ and $\angle P$ are subtended by RQ on the same side of it.]

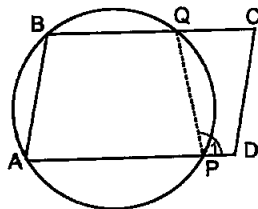
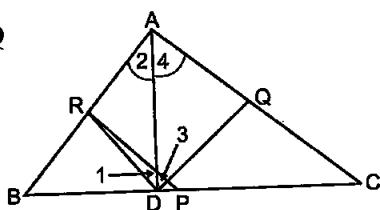
4. ABCD is a parallelogram. A circle through A, B is so drawn that it intersects AD at P and BC at Q. Prove that P, Q, C and D are concyclic.

Sol. ABCD is a parallelogram. A circle through A, B is so drawn that it intersects AD at P and BC at Q. We have to prove that P, Q, C and D are concyclic. Join PQ.

Now, side AP of the cyclic quadrilateral APQB is produced to D.

\therefore Ext. $\angle 1 =$ int. opp. $\angle B$

\therefore BA \parallel CD and BC cuts them



$\therefore \angle B + \angle C = 180^\circ$

[\because Sum of int. \angle s on the same side of the transversal is 180°]

or $\angle 1 + \angle C = 180^\circ$ [$\because \angle 1 = \angle B$ (proved)]

\therefore PDCQ is cyclic quadrilateral.

Hence, the points P, Q, C and D are concyclic.

5. Prove that angle bisector of any angle of a triangle and perpendicular bisector of the opposite side if intersect, they will intersect on the circumcircle of the triangle.

Sol. Given : ΔABC and l is perpendicular bisector of BC.

To prove : Angle bisector of $\angle A$ and perpendicular bisector of BC intersect on the circumcircle of ΔABC .

Proof: Let the angle bisector of $\angle A$ intersect circumcircle of ΔABC at D. Join BP and CP.

$\Rightarrow \angle BAP = \angle BCP$

[Angles in the same segment are equal]

$\Rightarrow \angle BAP = \angle BCP = \frac{1}{2} \angle A$... (1) [AP is bisector of $\angle A$]

Similarly, we have

$\angle PAC = \angle PBC = \frac{1}{2} \angle A$... (2)

From equations (1) and (2), we have

$\angle BCP = \angle PBC$

$\Rightarrow BP = CP$ [\because If the angles subtended by two chords of a circle at the centre are equal, the chords are equal]

\Rightarrow P lies on perpendicular bisector of BC.

Hence, angle bisector of $\angle A$ and perpendicular bisector of BC intersect on the circumcircle of ΔABC .

6. If two chords AB and CD of a circle AYDZBWCX intersect at right angles (see figure), prove that arc CXA + arc DZB = arc AYD + arc BWC = semicircle.

Sol. Given : Chords AB and CD of circle AYDZBWCX intersect at right angles.

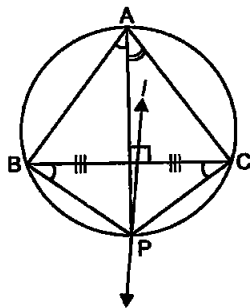
To prove : arc CXA + arc DZB = arc AYD + arc BWC = semicircle.

Construction : Join AC, AD, BD and BC.

Proof : O is any point inside the circle. Now, consider the chord CA.

The angle subtended by the chord AC at the circumference is $\angle CBA$.

Similarly, the angle subtended by the chord BD at the circumference is $\angle BCD$.



Now, consider the right triangle BOC.

Thus, by angle sum property, we have :

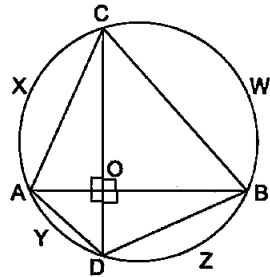
$$\angle COB + \angle CBA + \angle BCD = 180^\circ$$

$$\Rightarrow 90^\circ + \angle CBA + \angle BCD = 180^\circ$$

$$\Rightarrow \angle CBA + \angle BCD = 180^\circ - 90^\circ$$

$$\Rightarrow \angle CBA + \angle BCD = 90^\circ$$

That is the sum of angle subtended by the arc CXA and the angle subtended by the arc BZD = 90°



$$\text{arc } \widehat{CXA} + \text{arc } \widehat{BZD} = 90^\circ \quad \dots (1)$$

Now, consider the chord BC.

The angle subtended by the chord BC at the centre is $\angle BAC$.

Similarly, the angle subtended by the chord AD at the centre is $\angle ACD$.

Now, consider the right triangle AOC.

Thus, by angle sum property, we have :

$$\angle COA + \angle BAC + \angle ACD = 180^\circ$$

$$\Rightarrow 90^\circ + \angle BAC + \angle ACD = 180^\circ$$

$$\Rightarrow \angle BAC + \angle ACD = 180^\circ - 90^\circ$$

$$\Rightarrow \angle BAC + \angle ACD = 90^\circ$$

That is the sum of angle subtended by the arc CWB and the angle subtended by the arc AYD = 90°

$$\text{arc } \widehat{CWB} + \text{arc } \widehat{AYD} = 90^\circ \quad \dots (2)$$

From equations (1) and (2), we have

$$\text{arc } \widehat{CXA} + \text{arc } \widehat{BZD} = \text{arc } \widehat{CWB} + \text{arc } \widehat{AYD} = 90^\circ$$

We know that the arc of a circle subtending a right angle at any point of the circle in its alternate segment is a semi-circle.

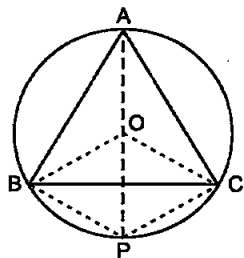
Thus, we have

$$\text{arc } \widehat{CXA} + \text{arc } \widehat{BZD} = \text{arc } \widehat{CWB} + \text{arc } \widehat{AYD} = \text{Semicircle}$$

Hence, proved.

7. If ABC is equilateral triangle inscribed in a circle and P be any point on a minor arc BC which does not coincide with B or C, prove that PA is angle bisector of $\angle BPC$.

Sol. Since equal chords of a circle subtends equal angles at the centre, so we have
 chord AB = chord AC [Given]



so $\angle AOB = \angle AOC$... (1)

Since the angle subtended by an arc at the centre is double the angle subtended by it at any point on the remaining part of the circle,

$\therefore \angle APC = \frac{1}{2} \angle AOC$... (2)

and $\angle APB = \frac{1}{2} \angle AOB$... (3)

$\therefore \angle APC = \angle APB$ [From (1), (2) and (3)]

Hence, PA is the bisector of $\angle BPC$.

8. In the given fig., AB and CD are two chords of a circle intersecting each other at point E. Prove that $\angle AEC = \frac{1}{2}$ (Angle subtended by an arc CXA at the centre + angle subtended by an arc DYB at the centre).

Sol. AB and CD are two chords of a circle intersecting each other at point E.

We have to prove that $\angle AEC = \frac{1}{2}$ (Angle subtended by an arc CXA at the centre + angle subtended by arc DYB at the centre).

Join AC, BC and BD.

Since the angle subtended by an arc at the centre is double the angle subtended by it at any point on the remaining part of the circle, Now, arc CXA subtends $\angle AOC$ at the centre and $\angle ABC$ at the remaining part of the circle, so

$\angle AOC = 2\angle ABC$... (1)

Similarly, $\angle BOD = 2\angle BCD$... (2)

Now, adding (1) and (2), we get

$\angle AOC + \angle BOD = 2(\angle ABC + \angle BCD)$... (3)

Since exterior angle of a triangle is equal to the sum of interior opposite angles, so in $\triangle CEB$ we have,

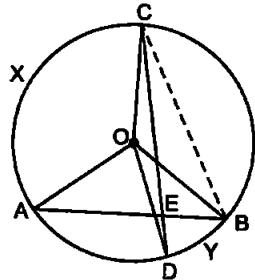
$\therefore \angle AEC = \angle ABC + \angle BCD$... (4)

From (3) and (4), we get

$\angle AOC + \angle BOD = 2\angle AEC$

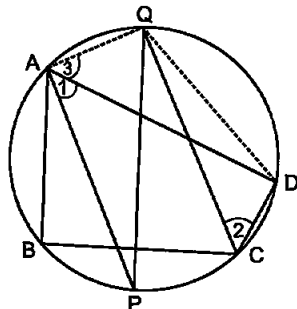
or $\angle AEC = \frac{1}{2}(\angle AOC + \angle BOD)$

Hence, $\angle AEC = \frac{1}{2}$ (Angle subtended by an arc CXA at the centre + angle subtended by an arc DYB at the centre).



9. If bisectors of opposite angles of a cyclic quadrilateral ABCD intersect the circle, circumscribing it at points P and Q, prove that PQ is a diameter of the circle.

Sol. The bisectors of opposite angles $\angle A$ and $\angle C$ of a cyclic quadrilateral ABCD intersect the circle at the point P and Q, respectively.



We have to prove that PQ is a diameter of the circle.

Join AQ and DQ.

Since opposite angles of a cyclic quadrilateral are supplementary, so in cyclic quadrilateral ABCD, we have

$$\angle DAB + \angle DCB = 180^\circ$$

$$\text{So, } \frac{1}{2} \angle DAB + \frac{1}{2} \angle DCB = \frac{1}{2} (180^\circ)$$

$$\Rightarrow \angle 1 + \angle 2 = 90^\circ$$

[\because AP and CQ are the bisectors of $\angle A$ and $\angle C$ respectively]

$$\therefore \angle 1 + \angle 3 = 90^\circ$$

[$\because \angle 2 = \angle 3$]

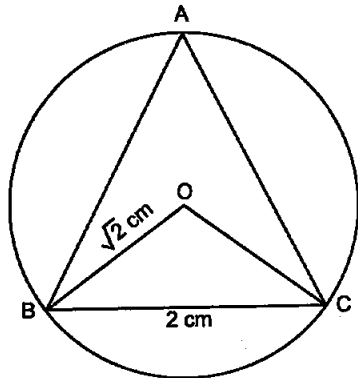
[$\because \angle 2$ and $\angle 3$ are angles in the same segment of a circle with chord QD]

$$\Rightarrow \angle PAQ = 90^\circ$$

$\therefore \angle PAQ$ is in a semi-circle

Hence, PQ is a diameter of circle.

10. A circle has radius $\sqrt{2}$ cm. It is divided into two segments by a chord of length 2 cm. Prove that the angle subtended by the chord at a point in major segment is 45° .



Sol. A circle with centre O and radius $\sqrt{2}$ cm. Chord BC, 2 cm long divides the circle into two segments. $\angle BAC$ lies in the major segment.

We have to prove that $\angle BAC = 45^\circ$.

Join OB and OC.

$$BC^2 = (2)^2 = 4 = 2 + 2 = (\sqrt{2})^2 + (\sqrt{2})^2$$

$$\Rightarrow BC^2 = OB^2 + OC^2$$

In $\triangle BOC$, we have

$$BC^2 = OB^2 + OC^2$$

$\therefore \angle BOC = 90^\circ$ [By converse of Pythagoras theorem]

Now, \widehat{BC} subtends $\angle BOC$ at the centre O and $\angle BAC$ at the remaining part of the circle.

$$\therefore \angle BAC = \frac{1}{2} \angle BOC = \frac{1}{2} \times 90^\circ = 45^\circ$$

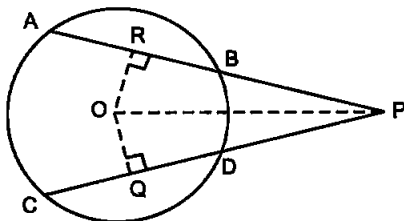
Hence, proved.

11. Two equal chords AB and CD of a circle when produced intersect at a point P , prove that $PB = PD$.
- Sol. Given: AB and CD two equal chords of a circle with centre O when produced intersect at P .

To prove: $PB = PD$.

Construction: Draw $OR \perp AB$ and $OQ \perp CD$. Join OP .

Proof: $\because OR \perp AB$ and $OQ \perp CD$ from the centre O of circle



$\therefore R$ is mid-point of AB and Q is the mid-point of CD .

[$\because \perp$ from the centre to a chord bisects the chord]

$$\therefore AB = CD \quad [\text{Given}]$$

$$\therefore \frac{1}{2} AB = \frac{1}{2} CD$$

$$\therefore AR = CQ \text{ and } RB = QD \quad \dots (1)$$

$$\therefore AB = CD, \therefore OR = OQ \quad \dots (2)$$

[\because Equal chords are equidistant from the centre]

Now, in right-angled Δ s ORP and OQP , we have

$$\angle ORP = \angle OQP \quad [\text{Each } 90^\circ]$$

$$\text{hyp. } OP = \text{hyp. } OP \quad [\text{Common side}]$$

$$OR = OQ \quad [\text{From (2)}]$$

$$\therefore ORP \cong OQP \quad [\text{By R.H.S. axiom}]$$

$$\therefore RP = QP \quad [\text{CPCT}] \quad \dots (3)$$

Now, subtracting (1) from (3)

$$RP - RB = QP - QD$$

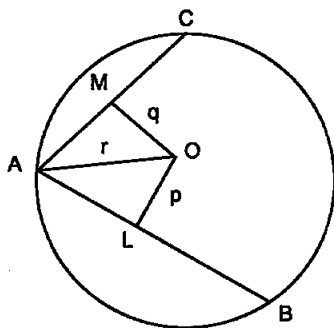
$$\Rightarrow PB = PD$$

Hence, proved.

12. AB and AC are two chords of a circle of radius r such that $AB = 2AC$. If p and q are the distances of AB and AC from the centre, prove that

$$4q^2 = p^2 + 3r^2$$

Sol. A circle with centre O and radius r in which there are two chords such that $AB = 2AC$. $OL \perp AB$ and $OM \perp AC$. $OL = p$ and $OM = q$. We have to prove that $4q^2 = p^2 + 3r^2$.
Since perpendicular from the centre to a chord bisects the chord
In right $\triangle AOL$, we have



$$r^2 = AL^2 + p^2$$

$$\Rightarrow AL^2 = r^2 - p^2$$

$$\therefore \left(\frac{1}{2}AB\right)^2 = r^2 - p^2 \Rightarrow \frac{1}{4}AB^2 = r^2 - p^2$$

$$\Rightarrow AB^2 = 4(r^2 - p^2)$$

$$\Rightarrow (2AC)^2 = 4(r^2 - p^2)$$

$[\because AB = 2AC]$

$$\Rightarrow 4AC^2 = 4(r^2 - p^2)$$

...(1)

Again, in right $\triangle AOM$, we have

$$r^2 = AM^2 + q^2 \Rightarrow AM^2 = r^2 - q^2$$

Since \perp from the centre to a chord bisects the chord

$$\therefore \left(\frac{1}{2}AC\right)^2 = r^2 - q^2 \Rightarrow \frac{1}{4}AC^2 = r^2 - q^2$$

$$\Rightarrow AC^2 = 4(r^2 - q^2)$$

...(2)

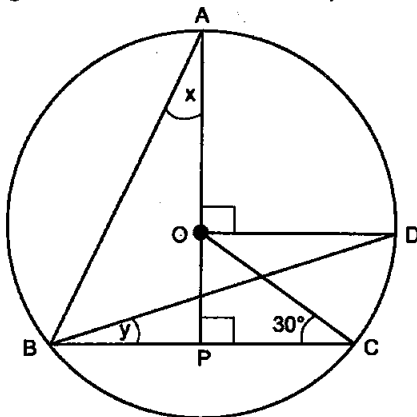
From (1) and (2), we get

$$4\{4(r^2 - q^2)\} = 4(r^2 - p^2)$$

$$\Rightarrow 4r^2 - 4q^2 = r^2 - p^2 \Rightarrow 4q^2 = 3r^2 + p^2$$

Hence, $4q^2 = p^2 + 3r^2$

13. In the given figure, O is the centre of the circle, $\angle BCO = 30^\circ$. Find x and y .



Sol. O is the centre of the circle and $\angle BCO = 30^\circ$. We have to find the values of x and y .

In right $\triangle OCP$, we have

$$\angle POC = 180^\circ - (\angle OPC + \angle PCO)$$

$$\Rightarrow \angle POC = 180^\circ - (90^\circ + 30^\circ) = 60^\circ$$

Now, $\angle AOD = 90^\circ$ [Given]

$$\angle AOD + \angle DOP = 180^\circ \quad \text{[Angles of a linear pair]}$$

$$\begin{aligned} \therefore \angle DOP &= 180^\circ - \angle AOD \\ &= 180^\circ - 90^\circ = 90^\circ \end{aligned}$$

Now, $\angle COD = 90^\circ - \angle POC = 90^\circ - 60^\circ = 30^\circ$

Since the angle subtended by an arc at the centre is double the angle subtended by it at any point on the remaining part of the circle,

$$\therefore \angle CBD = \frac{1}{2} \angle COD \Rightarrow y = \frac{1}{2} \times 30^\circ = 15^\circ$$

Also, $\angle ABD = \frac{1}{2} \angle AOD = \frac{1}{2} \times 90^\circ = 45^\circ$

Now, in $\triangle ABP$, we have $x + (45^\circ + y) + 90^\circ = 180^\circ$

$$\Rightarrow x + 45^\circ + 15^\circ + 90^\circ = 180^\circ$$

$$\Rightarrow x = 180^\circ - 150^\circ = 30^\circ$$

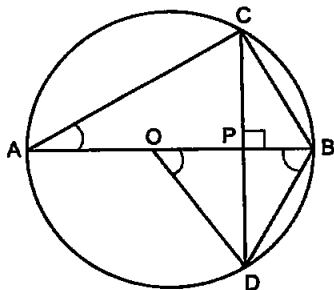
Hence, $x = 30^\circ$ and $y = 15^\circ$.

14. In the given figure, O is the centre of the circle, $BD = OD$ and $CD \perp AB$. Find $\angle CAB$.

Sol. In $\triangle ODB$, we have

$$BD = OD \quad \text{[Given]}$$

$$\therefore \angle DOB = \angle DBO \quad \text{[}\because \text{Angles opp. to equal sides of triangle are equal]}$$



In $\triangle ODP$ and $\triangle BDP$, we have

$$\angle DOP = \angle DBP \quad \text{[}\because \angle DOB = \angle DBO \text{ (Proved above)]}$$

$\angle DPO = \angle DPB$ [Each = 90°]
 $OD = BD$ [Given]
 $\therefore \triangle ODP \cong \triangle BDP$ [By AAS congruence rule]
 $\therefore \angle ODP = \angle BDP$...(1) [CPCT]
 Now, $OD = OB$ [Radii of the same circle]
 and $OD = BD$ [Given]
 $\therefore OB = OD = BD$, so $\triangle OBD$ is equilateral.
 $\therefore \angle ODB = 60^\circ$

[\because Each angle of an equilateral triangle is 60°]

Now, $\angle BDP = \frac{1}{2} \angle ODB$ [From (1)]

$\Rightarrow \angle BDP = \frac{1}{2} \times 60^\circ = 30^\circ$ or $\angle CDB = 30^\circ$

Since angles in the same segment of a circle are equal, so we have
 So, $\angle CAB = \angle CDB = 30^\circ$

□□□