

CHAPTER 2

Acids, Bases and Salts

3.1 ACIDS

Acids are chemical compounds which have sour taste, consist of hydrogen (H), and turn blue litmus solution red. On the basis of their sources, acids can be classified as:

3.1.1 Organic Acids

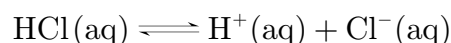
They are derived from living organisms, i.e., plants and animals. For example, tomatoes contain oxalic acid and ants contain formic acid.

3.1.2 Mineral Acids

They are obtained from mineral sources, e.g., sulphuric acid, nitric acid and hydrochloric acid. They are inorganic acids. Many mineral acids find extensive use and application.

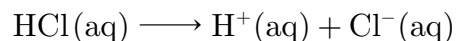
3.1.3 Arrhenius Theory of Acids

According to this theory, acids are substances that ionise to give H^+ ions when dissolved in water, e.g.,



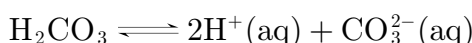
3.1.4 Strong Acids

These acids ionise more or less completely when dissolved in water, e.g., sulphuric acid (H_2SO_4) nitric acid (HNO_3) and hydrochloric acid (HCl).



3.1.5 Weak Acids

These acids ionise to a small extent when dissolved in water, e.g., acetic acid (CH_3COOH), formic acid ($HCOOH$) and carbonic acid (H_2CO_3).



3.1.6 Reactions of Acids with Metals

Dilute acids react with metals to evolve hydrogen.



H_2 gas is not evolved when a metal reacts with nitric acid (HNO_3).

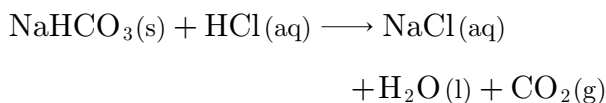
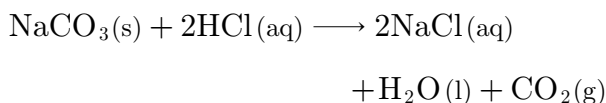
3.1.7 Reactions of Acids with Metal Oxides

Metal oxides, being basic in nature, react with acids to form salt and water.



3.1.8 Reactions of Acids with Metal Carbonates and Metal Hydrogen carbonates

Acids break up metal carbonates and metal hydrogen carbonates to evolve carbon dioxide gas with brisk effervescence.



3.2 BASES

Bases are chemical compounds which have bitter taste, are soapy and slippery to touch, and turn red litmus solution blue, e.g., sodium hydroxide, potassium hydroxide, aluminium hydroxide, etc. Those bases which are soluble in water are called alkalis.

3.2.1 Arrhenius Theory of Bases

According to this theory, bases are substances that ionise to give hydroxyl ion (OH^-) when dissolved in water, e.g.,



3.2.2 Strong Bases

They ionise more or less completely on dissolving in water, e.g., NaOH, KOH, $\text{Ca}(\text{OH})_2$ etc.



3.2.3 Weak Bases

They ionise to a small extent on dissolving in water, e.g., ammonium hydroxide (NH_4OH), copper hydroxide [$\text{Cu}(\text{OH})_2$], etc.



3.2.4 Indicators

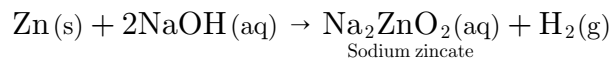
Acid-base indicators (indicators) are natural or synthetic dyes which show a change of colour depending upon the acidity or alkalinity of a solution.

The indicator like litmus is red in acidic and blue in basic medium. Methyl orange is red in acidic and yellow in basic medium. Phenolphthalein is colourless in acidic and pinkish-red in basic medium.

- Olfactory Indicators** : Those substances whose odour changes in acidic or basic medium are called olfactory indicators, e.g., the smell of onion diminishes in a base but remains as such in an acid.

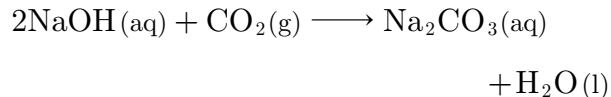
3.2.5 Reactions of Bases with Metals

Metals like Zn and Al react with strong alkalis to evolve H_2 gas.



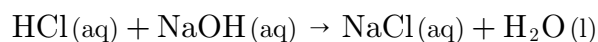
3.2.6 Reactions of Bases with Non-metallic Oxides

Bases react with acidic oxides to form salt and water.



3.2.7 Neutralisation

When an acid reacts with a base, it gives salt and water, it is called neutralisation reaction, and also it is an exothermic process.



3.2.8 pH

The negative exponent of 10 to which it must be raised in order to express the hydrogen ion concentration of the solution in mole per litre. Mathematically, $[\text{H}^+(\text{aq})] = 10^{-\text{pH}}$

Higher the $\text{H}^+(\text{aq})$ concentration, lower is the pH value.

3.2.9 pH Scale

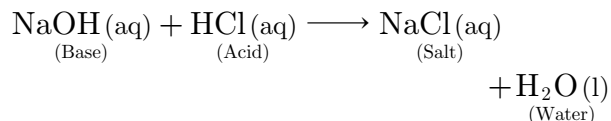
In neutral solution and pure water, $\text{pH} = 7$, acidic solutions, $\text{pH} < 7$ and alkaline solutions, $\text{pH} > 7$.

3.2.10 Universal Indicator

It is a pH indicator composed of several compounds that exhibit colour changes over a pH value range from 0 to 14. It not only shows acidic or basic nature of solution but also shows approximate pH by giving a particular colour for a specific value of pH.

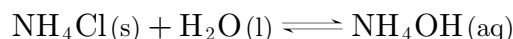
3.3 SALTS

They are ionic compounds formed by the combination of cation from base and anion from acid.



3.3.1 pH of Salt Solutions

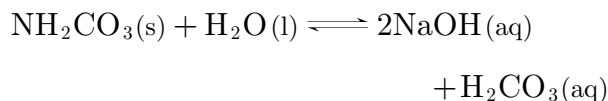
- The salt of a strong acid and a weak base gives acidic solution (pH less than 7).



+HCl(aq) is called brine.

Here, hydrochloric acid (strong acid) ionises to give $\text{H}^+(\text{aq})$ ions which is greater than ammonium hydroxide (weak base) ionises to give $\text{OH}^-(\text{aq})$ ions, so, the solution is acidic.

- The salt of a strong base (NaOH) and a weak acid H_2CO_3 gives basic solution (pH more than 7).



Here, NaOH releases $\text{OH}^-(\text{aq})$ ion more and H_2CO_3 releases $\text{H}^+(\text{aq})$ ion less, so, the solution is basic.

- The salt of a weak acid (HA) and a weak base (BOH) gives slightly acidic or slightly basic or neutral solution (BA).



If acid is stronger than base, the solution is acidic ($\text{pH} < 7$). If acid is weaker than the base, the solution is basic ($\text{pH} > 7$). If acid and base formed are of equal strength, the solution is neutral ($\text{pH} = 7$).

- The salt of a strong acid and a strong base gives neutral solution ($\text{pH} = 7$). Salts of strong acids and bases, e.g., NaCl, Na_2SO_4 , etc., on dissolving in water do not hydrolyse, so, not disturb the $\text{pH} = 7$.

3.3.2 Sodium Chloride (NaCl)

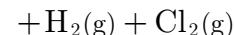
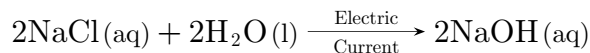
It is common salt. It is obtained from sea water by the process of evaporation.

Uses of Sodium Chloride

- Sodium chloride (NaCl) helps in proper functioning of the human body, i.e., in muscle contraction, etc. It helps the body to prepare hydrochloric acid in gastric juice.
- It is used in cooking food and it improves the flavour of food.
- It is used to prepare NaOH, Na_2CO_3 , etc.

3.3.3 Sodium Hydroxide (NaOH)

It is prepared on a large scale by electrolysis of a conc. solution of sodium chloride. This solution



Hydrogen gas is obtained at cathode and chlorine gas at anode. NaOH remains in solution. The solution on evaporation gives solid NaOH. This process is called chlor-alkali process.

- Sodium Hydroxide is used in manufacturing soaps, detergents, paper, artificial silk (rayon) and dyes. It is used in manufacturing chemicals, i.e., sodium hypochlorite, sodium chlorate, etc.

3.3.4 Uses of Hydrogen Gas

It is used In manufacturing of ammonia and methyl alcohol and to prepare hydrochloric acid. It is used fur hydrogenating oils to give fats. Vegetable oils on hydrogenation give margarine. Vegetable oil + $\text{H}_2 \rightarrow$ Margarine (vegetable ghee)

3.3.5 Uses of Chlorine Gas

It is used as a bleaching agent in textile industry and used for sterilising water.

3.3.6 Washing Soda ($\text{Na}_2\text{CO}_3 \cdot 10\text{H}_2\text{O}$)

It is obtained from sodium carbonate (Na_2CO_3) through ammonia-soda or Solvay process. Its chemical name is sodium carbonate decahydrate. **Uses of Washing Soda :** It is used for washing clothes and in manufacturing glass, caustic soda, borax, etc.

3.3.7 Baking Soda (NaHCO_3)

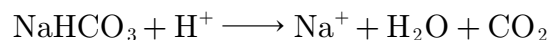
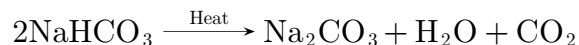
It is prepared by passing carbon dioxide through an aqueous solution of sodium carbonate. Its chemical name is sodium hydrogen carbonate or sodium bicarbonate.



It Is a white crystalline solid, sparingly soluble in water and its aqueous solution is mildly alkaline. It decomposes on heating to give Na_2CO_3 and release CO_2 . It reacts with acids (H^+) to evolve CO_2 .

To Purchase Hard Book of From Amazon Click Here.

For More Details Whatsapp at 8905629969

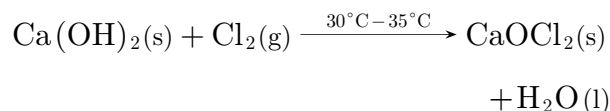


3.3.8 Uses of Baking Soda

It is used in cooking and as an antacid to correct the acidity of stomach. It is used in making effervescent drinks and in fire extinguishers, and also in preparing baking powder.

3.3.9 Bleaching Powder

The chemical name of bleaching powder is calcium oxychloride (CaOCl_2). It is obtained by passing Cl_2 gas over dry slaked lime.

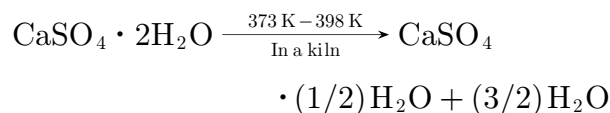


3.3.10 Uses of Bleaching Powder

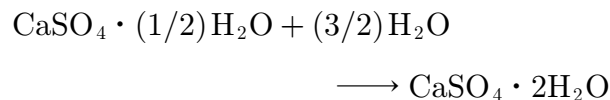
It is used for bleaching of wood pulp, cotton, and as a disinfectant.

3.3.11 Plaster of Paris

Its chemical name is calcium sulphate hemihydrate [$\text{CaSO}_4 \cdot (1/2)\text{H}_2\text{O}$]. It is obtained by heating gypsum ($\text{CaSO}_4 \cdot 2\text{H}_2\text{O}$).



Plaster of Paris on mixing with an adequate quantity of water, it forms a gypsum again.



3.3.12 Uses of Plaster of Paris

It is used for immobilising the affected fractured part of bone leading to quick recovery. It is also used for making decorative pieces such as toys, statues, etc.

Plaster of Paris should be stored in moisture-proof container.

3.3.13 Water of Crystallisation

1. **Hydrated Salts** : A crystalline salt molecule

that is loosely attached to a certain number of water molecules is called hydrated salt. These water molecules are water of crystallisation.

- Hygroscopy** : Those substances which absorb moisture from atmosphere at ordinary temperature, are called hygroscopic substances, and the property is known as hygroscopy, e.g., conc. H_2SO_4 , etc.
- Deliquescence** : Those substances which absorb moisture from atmosphere at ordinary temperature and ultimately dissolve in the absorbed water to form a solution are called deliquescent substances and the phenomenon is called deliquescence, e.g., NaOH , KOH , etc.
- Efflorescence** : Certain hydrated salts when exposed to air at ordinary temperature lose their water of crystallisation either partially or completely, are called efflorescent salts and the phenomenon is called efflorescence, e.g., washing soda, epsom salt, etc.

□□□□□□

Don't Take Printout of This File because this is not useful. You can purchase hard book from Amazon. Hard book includes explanation of all MCQs in print form.

MULTIPLE CHOICE QUESTIONS

1. A solution turns red litmus blue, its pH is likely to be
- 1
 - 4
 - 5
 - 10

Sol : www.cbse.site/sc/bm101

2. A solution reacts with crushed egg-shells to give a gas that turns lime-water milky. The solution contains
- NaCl
 - HCl
 - LiCl
 - KCl

Sol : www.cbse.site/sc/bm102

3. 10 mL of a solution of NaOH is found to be completely neutralised by 8 mL of a given solution of HCl. If we take 20 mL of the same solution of NaOH, the amount of HCl solution (the same solution as before) required to neutralise it will be-
- 4 mL
 - 8 mL
 - 12 mL
 - 16 mL

Sol : www.cbse.site/sc/bm103

4. Which one of the following types of medicines is used for treating indigestion?
- Antibiotic
 - Analgesic
 - Antacid
 - Antiseptic

Sol : www.cbse.site/sc/bm104

5. What happens when a solution of an acid is mixed with a solution of a base in a test tube?
- Salt formation takes place.
 - The temperature of the solution remains the same.
 - The temperature of the solution decreases.
 - The temperature of the solution increases.
- Only 1
 - 1 and 2
 - 2 and 4
 - 1 and 4

Sol : www.cbse.site/sc/bm105

6. An aqueous solution turns red litmus solution blue. Excess addition of which of the following solution would reverse the change?
- Baking powder
 - Lime
 - Ammonium hydroxide solution
 - Hydrochloric acid

Sol : www.cbse.site/sc/bm106

7. During the preparation of hydrogen chloride gas on a humid day, the gas is usually passed through the guard tube containing calcium chloride. The role of calcium chloride taken in the guard tube is to
- absorb the evolved gas
 - moisten the gas
 - absorb moisture from the gas
 - absorb Cl^- ions from the evolved gas.

Sol : www.cbse.site/sc/bm107

8. Which of the following salts does not contain water of crystallization?

- (a) Blue vitriol
- (b) Baking soda
- (c) Washing soda
- (d) Gypsum

Sol : www.cbse.site/sc/bm108

9. Sodium carbonate is a basic salt because it is a salt of

- (a) strong acid and strong base
- (b) weak acid and weak base
- (c) strong acid and weak base
- (d) weak acid and strong base

Sol : www.cbse.site/sc/bm109

10. Calcium phosphate is present in tooth enamel. Its nature is

- (a) basic
- (b) acidic
- (c) neutral
- (d) amphoteric

Sol : www.cbse.site/sc/bm110

11. A sample of soil is mixed with water and allowed to settle. The clear supernatant solution turns the pH paper yellowish-orange. Which of the following would change the colour of this pH paper to greenish-blue?

- (a) Lemon Juice
- (b) Vinegar
- (c) Common salt
- (d) An antacid

Sol : www.cbse.site/sc/bm111

12. Which of the following gives the correct

increasing order of acidic strength?

- (a) Water < Acetic < Hydrochloric
- (b) Water < Hydrochloric < Acetic
- (c) Acetic < Water < Hydrochloric
- (d) Hydrochloric < Water < Acetic

Sol : www.cbse.site/sc/bm112

13. If a few drops of a concentrated acid accidentally spills over the hand of a student, what should be done?

- (a) Wash the hand with saline solution.
- (b) Wash the hand immediately with plenty of water and apply a paste of sodium hydrogen carbonate.
- (c) After washing with plenty of water apply solution of sodium hydroxide on the hand.
- (d) Neutralize the acid with a strong alkali.

Sol : www.cbse.site/sc/bm113

14. Sodium hydrogen carbonate when added to acetic acid evolves a gas. Which of the following statements are true about the gas evolved?

1. It turns lime water milky.
 2. It extinguishes a burnings splinter.
 3. it dissolves in a solution of sodium hydroxide.
 4. It has a pungent odour.
- (a) 1 and 2
 - (b) 1, 2 and 3
 - (c) 2, 3 and 4
 - (d) 1 and 4

Sol : www.cbse.site/sc/bm114

15. Common salt besides being used in kitchen can also be used as the raw material for making

1. washing soda

To Purchase Hard Book of From Amazon Click Here.

For More Details Whatsapp at 8905629969

2. bleaching powder
3. baking soda
4. slaked lime

- (a) 1 and 2
- (b) 1, 2 and 4
- (c) 1 and 3
- (d) 1, 3 and 4

Sol : www.cbse.site/sc/bm115

16. One of the constituents of baking powder is sodium hydrogen carbonate, the other constituent is

- (a) hydrochloric acid
- (b) tartaric acid
- (c) acetic acid
- (d) sulphuric acid

Sol : www.cbse.site/sc/bm116

17. To protect tooth decay we are advised to brush our teeth regularly. The nature of the toothpaste commonly used is

- (a) acidic
- (b) neutral
- (c) basic
- (d) corrosive

Sol : www.cbse.site/sc/bm117

18. Which of the following statements is correct about an aqueous solution of an acid and of base?

1. Higher the pH, stronger the acid
2. Higher the pH, weaker the acid
3. Lower the pH, stronger the base
4. Lower the pH, weaker the base

- (a) 1 and 3
- (b) 2 and 3
- (c) 1 and 4
- (d) 2 and 4

Sol : www.cbse.site/sc/bm118

19. The pH of the gastric juices released during digestion is

- (a) less than 7
- (b) more than 7
- (c) equal to 7
- (d) equal to 0

Sol : www.cbse.site/sc/bm119

20. Which of the following phenomena occur, when a small amount of acid is added to water?

1. Ionization
2. Neutralization
3. Dilution
4. Salt formation

- (a) 1 and 2
- (b) 1 and 3
- (c) 2 and 3
- (d) 2 and 4

Sol : www.cbse.site/sc/bm120

21. Which one of the following can be used as an acid-base indicator by a visually impaired student?

- (a) Litmus
- (b) Turmeric
- (c) Vanilla essence
- (d) Petunia leaves

Sol : www.cbse.site/sc/bm121

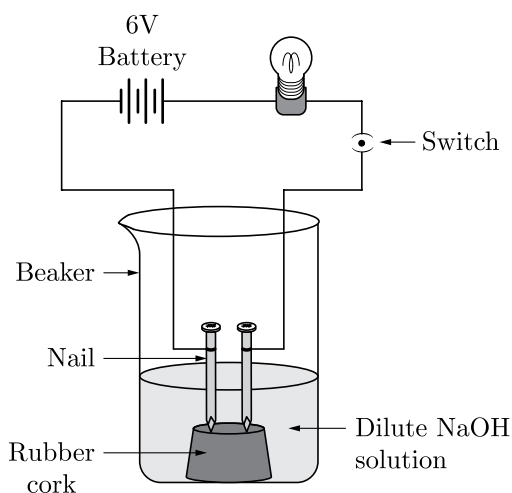
22. Which of the following substances will not give carbon dioxide on treatment with dilute acid?

- (a) Marble
- (b) Limestone
- (c) Baking soda

(d) Lime

Sol : www.cbse.site/sc/bm122**23.** Which of the following is acidic in nature?

- (a) Lime juice
- (b) Human blood
- (c) Lime water
- (d) Antacid

Sol : www.cbse.site/sc/bm123**24.** In an attempt to demonstrate electrical conductivity through an electrolyte, the following apparatus (figure) was set up.

Which among the following statement (s) is (are) correct?

1. Bulb will not glow because electrolyte is not acidic.
2. Bulb will glow because NaOH is a strong base and furnishes ions for conduction.
3. Bulb will not glow because circuit is incomplete.
4. Bulb will not glow because it depends upon the type of electrolytic solution.

- (a) 1 and 3
- (b) 2 and 4
- (c) Only 2

(d) Only 4

Sol : www.cbse.site/sc/bm124**25.** Which of the following is used for dissolution of gold?

- (a) Hydrochloric acid
- (b) Sulphuric acid
- (c) Nitric acid
- (d) Aqua regia

Sol : www.cbse.site/sc/bm125**26.** Which of the following is not a mineral acid?

- (a) Hydrochloric acid
- (b) Citric acid
- (c) Sulphuric acid
- (d) Nitric acid

Sol : www.cbse.site/sc/bm126**27.** Which among the following is not a base?

- (a) NaOH
- (b) KOH
- (c) NH_4OH
- (d) $\text{C}_2\text{H}_5\text{OH}$

Sol : www.cbse.site/sc/bm127**28.** Which of the following statements is not correct?

- (a) All metal carbonates react with acid to give a salt, water and carbon dioxide.
- (b) All metal oxides react with water to give salt and acid.
- (c) Some metals react with acids to give salt and hydrogen.
- (d) Some non-metal oxides react with water to form acid.

Sol : www.cbse.site/sc/bm128

29. Match the chemical substances given in column (A) with their appropriate application given in column (B)

	Column (A)		Column (B)
A.	Bleaching powder	(i)	Preparation of glass
B.	Baking soda	(ii)	Production of H_2 and Cl_2
C.	Washing soda	(iii)	Decolorization
D.	Sodium chloride	(iv)	Antacid

- (a) A- (ii), B- (i), C- (iv), D- (iii)
 (b) A- (iii), B- (ii), C- (iv), D- (i)
 (c) A- (iii), B- (iv), C- (i), D- (ii)
 (d) A- (ii), B- (iv), C- (i), D- (iii)

Sol : www.cbse.site/sc/bm129

30. Equal volumes of hydrochloric acid and sodium hydroxide solutions of same concentration are mixed and the pH of the resulting solution is checked with a pH paper. What would be the colour obtained?



- (a) Red
 (b) Yellow
 (c) Yellowish green
 (d) Blue

Sol : www.cbse.site/sc/bm130

31. Which of the following is (are) true when $HCl(g)$ is passed through water?
- It does not ionise in the solution as it is a covalent compound.
 - It ionizes in the solution.

- It gives both hydrogen and hydroxyl ion in the solution.
 - It forms hydronium ion in the solution due to the combination of hydrogen ion with water molecule.
- (a) Only 1
 (b) Only 3
 (c) 2 and 4
 (d) 3 and 4

Sol : www.cbse.site/sc/bm131

32. Which of the following statements is true for acids?
- (a) Bitter and change red litmus to blue
 (b) Sour and change red litmus to blue
 (c) Sour and change blue litmus to red
 (d) Bitter and change blue litmus to red

Sol : www.cbse.site/sc/bm132

33. Which of the following are present in a dilute aqueous solution of hydrochloric acid?
- (a) $H_3O^+ + Cl^-$
 (b) $H_3O^+ + OH^-$
 (c) $Cl^- + OH^-$
 (d) Unionized HCl

Sol : www.cbse.site/sc/bm133

34. Identify the correct representation of reaction occurring during chlor-alkali process.
- (a) $2NaCl_{(l)} + 2H_2O_{(l)} \rightarrow 2NaOH_{(l)} + Cl_{2(g)} + H_{2(g)}$
 (b) $2NaCl_{(aq)} + 2H_2O_{(aq)} \rightarrow 2NaOH_{(aq)} + Cl_{2(g)} + H_{2(g)}$
 (c) $2NaCl_{(aq)} + 2H_2O_{(l)} \rightarrow 2NaOH_{(aq)} + Cl_{2(aq)} + H_{2(aq)}$
 (d) $2NaCl_{(aq)} + 2H_2O_{(l)} \rightarrow 2NaOH_{(aq)} + Cl_{2(g)} + H_{2(g)}$

To Purchase Hard Book of From Amazon Click Here.

For More Details Whatsapp at 8905629969

Sol : www.cbse.site/sc/bm134

35. Which of the following statements is/are correct for litmus?

- Litmus solution is a purple dye.
- It is extracted from lichen.
- In neutral solution. it remains colourless.

- (a) 1 and 2
(b) 2 and 3
(c) 1 and 3
(d) 1, 2 and 3

Sol : www.cbse.site/sc/bm135

36. Which of the following is/are correct for olfactory indicators?

- Their colour changes with acid or base.
- Onion, vanilla or clove are examples.

- (a) Only 1
(b) Only 2
(c) Both 1 and 2
(d) Neither 1 nor 2

Sol : www.cbse.site/sc/bm136

37. Which of the following are correctly matched?

1.	Acid + salt	metal + hydrogen
2.	Acid + metal carbonate	salt + carbon dioxide + water
3.	Metal oxide + acid	salt + water

- (a) 1 and 2
(b) 2 and 3
(c) 1 and 3
(d) 1, 2 and 3

Sol : www.cbse.site/sc/bm137

38. Which of the following is/are correct for

diluting acid?

- Adding acid to water by stirring.
- Adding water to acid by stirring.

- (a) Only 1
(b) Only 2
(c) Both 1 and 2
(d) Neither 1 nor 2

Sol : www.cbse.site/sc/bm138

39. Which of the following is/are correct for pH?

- A scale for measuring hydronium ion concentration.
- Values less than 7 on the pH scale represent an acidic solution.
- As the pH value increases from 7 to 14, it represents an increase in hydrogen ion concentration in the solution.

- (a) Only 1
(b) Only 2
(c) Only 3
(d) 1, 2 and 3

Sol : www.cbse.site/sc/bm139

40. Which of the following are correctly matched?

1.	Plants and animals	pH range is 7.0 to 7.8
2.	Rain water	pH is 7.6
3.	Tooth decay	pH less than 5.5

- (a) 1 and 2
(b) 2 and 3
(c) 1 and 3
(d) 1, 2 and 3

Sol : www.cbse.site/sc/bm140

41. Which of the following are correctly

To Purchase Hard Book of From Amazon Click Here.

For More Details Whatsapp at 8905629969

matched?

1.	Common salt	formed by sodium hydroxide and hydrochloric acid.
2.	Brine	aqueous solution of sodium chloride.
3.	Chlor-alkali process	formation of sodium chloride

- (a) 1 and 2
 (b) 2 and 3
 (c) 1 and 3
 (d) 1, 2 and 3

Sol : www.cbse.site/sc/bm141

42. Which of the following are correctly matched?

1.	Bleaching powder	oxidising agent in chemical industries.
2.	Baking powder	a mixture of sodium hydrogen carbonate and a mild edible acid.
3.	Washing soda	remove permanent hardness of water.

- (a) 1 and 2
 (b) 2 and 3
 (c) 1 and 3
 (d) 1, 2 and 3

Sol : www.cbse.site/sc/bm142

43. The chemical formula of plaster of paris is

- (a) $\text{CaSO}_4 \cdot \frac{1}{2}\text{H}_2\text{O}$
 (b) $\text{CaSO}_3 \cdot \frac{1}{2}\text{H}_2\text{O}$
 (c) $\text{Ca} \cdot \text{SO}_4 \frac{1}{2}\text{O}_2$
 (d) $\text{SO}_4 \cdot \frac{1}{2}\text{H}_2\text{O}$

Sol : www.cbse.site/sc/bm143

44. Which of the following are responsible for causing acid-rain?

- (a) Oxides of sulphur and carbon dioxide
 (b) Oxides of nitrogen and carbon monoxide
 (c) Hydrogen sulphide and carbon dioxide
 (d) Oxides of sulphur and nitrogen

Sol : www.cbse.site/sc/bm144

45. On washing with soap, a turmeric stain on the cloth turns to red because

1. Soap solution is alkaline.
 2. Soap solution is acidic.
 3. Turmeric contains a natural indicator.
 4. Turmeric contains litmus.

Select the correct alternative.

- (a) 1 and 3
 (b) 2 and 4
 (c) 3 and 2
 (d) 1 and 4

Sol : www.cbse.site/sc/bm145

46. Which of the following are used as an antacid to reduce acidity in stomach?

- (a) Sodium carbonate and magnesium hydroxide
 (b) Magnesium hydroxide and sodium hydroxide
 (c) Sodium bicarbonate and calcium hydroxide
 (d) Sodium bicarbonate and magnesium hydroxide

Sol : www.cbse.site/sc/bm146

47. A highly reactive element (X) reacts with oxygen of air even at room temperature to give an oxide (Y). The oxide (Y) is soluble in water. The aqueous solution of (Y) does not change the colour of red litmus solution but reacts with an aqueous solution of

To Purchase Hard Book of From Amazon Click Here.

For More Details Whatsapp at 8905629969

sodium hydroxide. Here X is-

- (a) sodium
- (b) phosphorus
- (c) carbon
- (d) sulphur

Sol : www.cbse.site/sc/bm147

X , Y and Z respectively are

- (a) CaCO_3 , Ca(OH)_2 , CaOCl_2
- (b) Ca(OH)_2 , CaO , CaOCl_2
- (c) CaCO_3 , CaOCl_2 , Ca(OH)_2
- (d) Ca(OH)_2 , CaCO_3 , CaOCl_2

Sol : www.cbse.site/sc/bm150

48. Some of the substances used in making of a modern safety match box are listed below :

1. Antimony trisulfide
2. Glass powder
3. Potassium chlorate
4. Red phosphorus

The head of modern safety match stick contains :

- (a) 1 and 4
- (b) 2 and 3
- (c) 3 and 4
- (d) 3 and 1

Sol : www.cbse.site/sc/bm148

49. Calamine is used to reduce the irritating effect of ant bite/sting because it reacts with (X) released due to the bite/sting of ants with (Y) present in calamine. Then (X) and (Y) respectively are :

- (a) Sodium hydrogen carbonate and formic acid
- (b) Formic acid and zinc carbonate
- (c) Acetic acid and common salt
- (d) Hydrochloric acid and zinc oxide

Sol : www.cbse.site/sc/bm149

50. A metal carbonate X on treatment with a mineral acid liberates a gas which when passed through an aqueous solution of a substance Y on reaction with the gas obtained at anode during electrolysis of brine gives a compound Z which can decolourise coloured fabrics. The compounds

51. A salt can be produced by reaction between

1. a weak acid and weak base.
 2. metal oxide and water.
 3. metal and a mineral acid.
 4. metal oxide and a mineral acid.
- (a) 1, 2 and 3
 - (b) 2, 3 and 4
 - (c) 3, 4 and 1
 - (d) 4, 1 and 2

Sol : www.cbse.site/sc/bm151

52. Which of the following is true about the two statements?

Statement I : Reactivity of aluminium decreases when it is dipped in nitric acid

Statement II : A protective layer of aluminium nitrate is formed when aluminium is dipped in nitric acid.

- (a) I is correct but II is incorrect
- (b) I is incorrect but II is correct
- (c) Both the statements are correct and II is also the correct explanation of I
- (d) Both the statements are correct but II is not correct explanation of I

Sol : www.cbse.site/sc/bm152

53. A silvery white metal X reacts with water at room temperature to produce a water soluble compound Y and a colourless gas Z . The reaction is highly exothermic and the Z catches fire immediately during the reaction. The solution of Y in water on reacting with stoichiometric amount of

dilute solution of hydrochloric acid gives a solution of $\text{pH} = 7.0$. The compounds X , Y and Z respectively are-

- (a) Al , $\text{Al}(\text{OH})_3$ and H_2
- (b) Ag , AgOH and H_2
- (c) K , KCl and H_2
- (d) Na , NaOH and H_2

Sol : www.cbse.site/sc/bm153

54. Match the items of Column I with the items of the Column II

	Column I		Column II
(i)	$\text{NH}_4\text{OH} + \text{CH}_3\text{COOH} \rightarrow \text{CH}_3\text{COONH}_4 + \text{H}_2\text{O}$	(A)	Thermal decomposition
(ii)	$2\text{AgBr} \rightarrow 2\text{Ag} + \text{Br}_2$	(B)	Thermite reaction
(iii)	$\text{ZnCO}_3 \rightarrow \text{ZnO} + \text{CO}_2$	(C)	Photochemical reaction
(iv)	$2\text{Al} + \text{Fe}_2\text{O}_3 \rightarrow 2\text{Fe} + \text{Al}_2\text{O}_3$	(D)	Neutralization reaction

- (a) (iv)-(B), (iii)-(D), (ii)-(A), (i)-(C)
- (b) (iii)-(A), (i)-(B), (iii)-(C), (iv)-(D)
- (c) (ii)-(B), (iv)-(A), (i)-(C), (iii)-(D)
- (d) (i)-(D), (ii)-(C), (iii)-(A), (iv)-(B)

Sol : www.cbse.site/sc/bm154

55. Which of the following represents the correct order of the acidic strength for equimolar aqueous solutions of HCl , H_2SO_4 , NH_4OH and NaOH

- (a) $\text{HCl} < \text{NH}_4\text{OH} < \text{NaOH} < \text{H}_2\text{SO}_4$
- (b) $\text{NH}_4\text{OH} < \text{NaOH} < \text{H}_2\text{SO}_4 < \text{HCl}$
- (c) $\text{HCl} < \text{H}_2\text{SO}_4 < \text{NH}_4\text{OH} < \text{NaOH}$
- (d) $\text{NaOH} < \text{NH}_4\text{OH} < \text{HCl} < \text{H}_2\text{SO}_4$

Sol : www.cbse.site/sc/bm155

56. P substance react with another substance Q to produce the product R and a gas S . If a mixture of the gas S and ammonia is

passed through an aqueous solution of R , baking soda is formed. The substances P and Q are

- (a) HCl and NaOH
- (b) HCl and Na_2CO_3
- (c) Na and HCl
- (d) Na_2CO_3 and H_2O

Sol : www.cbse.site/sc/bm156

57. The reaction that differs from the rest of the reaction given is-

- (a) formation of calcium oxide from limestone
- (b) formation of aluminium from aluminium oxide
- (c) formation of sodium carbonate from sodium hydrogen carbonate
- (d) formation of mercury from mercuric oxide

Sol : www.cbse.site/sc/bm157

58. An element X reacts with dilute H_2SO_4 as well as with NaOH to produce salt and $\text{H}_2(\text{g})$. Hence, it may be concluded that :

1. X is an electro-positive element.
2. oxide of X is basic in nature.
3. oxide of X is acidic in nature.
4. X is an electronegative element.

- (a) 1, 2, 3
- (b) 4, 1, 2
- (c) 3, 4, 1
- (d) 2, 3, 4

Sol : www.cbse.site/sc/bm158

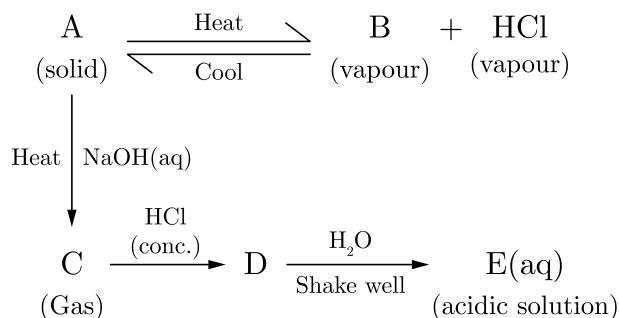
59. The turmeric solution will turn red by an aqueous solution of-

- (a) potassium acetate
- (b) copper sulphate
- (c) sodium sulphate

(d) ferric chloride

Sol : www.cbse.site/sc/bm159

60. The schematic diagram is given below :



Which of the following is an incorrect statement?

- A and E are chemically same.
- A and D are chemically same.
- D and E are chemically same.
- C and E are chemically same.

Sol : www.cbse.site/sc/bm160

61. When an acid reacts with a metal than X gas is liberated. Here X is-

- Ammonia gas
- Hydrogen gas
- Carbon dioxide gas
- Methane gas

Sol : www.cbse.site/sc/bm161

62. Which of the following is not true for acids?

- Acid react with copper (II) oxide to produce a blue solution.
- Acid liberate carbon dioxide gas when reacted with sodium carbon-ale
- Acid liberate hydrogen gas when reacted with magnesium ribbon.
- Acid produces hydrogen molecules when dissolved in water.

Sol : www.cbse.site/sc/bm162

63. Which of the following statement is incorrect for acids?

- They give pink colour with phenolphthalein.
- They give H^+ ions in water.
- They are sow in taste.
- They turn blue litmus red.

Sol : www.cbse.site/sc/bm163

64. Which two substances react to give salt and water only?

- Copper (II) oxide and ethanoic acid
- Magnesium and sulphuric acid
- Sodium oxide and water
- Zinc carbonate and hydrochloric acid

Sol : www.cbse.site/sc/bm164

65. A solution in test tube 'A' turns red litmus blue, evolves hydrogen gas on reaction with zinc and does not react with sodium carbonate. Whereas, solution in test tube 'B' turns blue litmus red, liberates hydrogen gas on reaction with zinc and evolves carbon dioxide gas with sodium carbonate. Identify 'A' and 'B'.

- 'A' is an acid, 'B' is a base.
- 'A' is a base, 'B' is an acid.
- Both 'A' and 'B' are bases.
- Both 'A' and 'B' are acids.

Sol : www.cbse.site/sc/bm165

66. Which of the following will turn red litmus to blue?

- Vinegar
- Banking soda solution
- Soft drink

(d) Lemon juice

Sol : www.cbse.site/sc/bm166

67. Which gas is evolved when acids react with metal carbonates?

- (a) H_2
- (b) CO_2
- (c) O_2
- (d) NH_3

Sol : www.cbse.site/sc/bm167

68. The colour of the pH paper turned red when it was dipped in X solution. The X is-

- (a) Dilute Hydrochloric acid.
- (b) Dilute sodium hydroxide solution.
- (c) Tap water
- (d) Dilute sodium bicarbonate solution.

Sol : www.cbse.site/sc/bm168

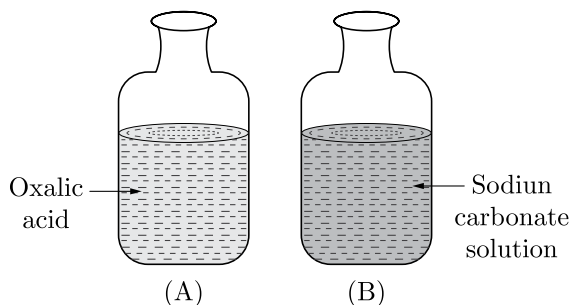
69. Which of the following is not a base?

- (a) NaCl
- (b) KOH
- (c) ZnO
- (d) $Al(OH)_3$

Sol : www.cbse.site/sc/bm169

Don't Take Printout of This File because this is not useful. You can purchase hard book from Amazon. Hard book includes explanation of all MCQs in print form.

70. When pH strip is dipped in each bottle, the colour shown by bottle A and B will be respectively:



- (a) orange, blue
- (b) blue, orange
- (c) green, blue
- (d) blue, green

Sol : www.cbse.site/sc/bm170

71. $2NaOH + Zn \longrightarrow X + H_2$

Here X is

- (a) Na_2ZnO_2
- (b) $NaZnO_2$
- (c) Na_2ZnO
- (d) Na_3ZnO_2

Sol : www.cbse.site/sc/bm171

72. Which of the following solutions has the lowest pH value?

- (a) 0.1 molar NaCl solution
- (b) 0.01 molar $NaHCO_3$ solution
- (c) 0.001 molar Na_2CO_3 solution
- (d) 0.01 molar NaOH solution

Sol : www.cbse.site/sc/bm172

73. On putting a few drops of X liquid on the pH paper the colour of pH paper changes to violet. The liquid X is

- (a) Dilute sodium hydroxide

- (b) Dilute hydrochloric acid
- (c) Dilute acetic acid
- (d) Water

Sol : www.cbse.site/sc/bm173

74. The term pH stands for:
- (a) potential of hydrogen
 - (b) peak of hydrogen
 - (c) push of hydrogen
 - (d) pointed to hydrogen

Sol : www.cbse.site/sc/bm174

75. pH of different solution are given in the table below.

Solution	pH
A	2.4
B	14.0
C	7.5
D	9.0

Arrange the above solution in the increasing order of OH^- ion concentration.

- (a) $D < C < B < A$
- (b) $A < C < D < B$
- (c) $C < D < B < A$
- (d) $B < D < C < A$

Sol : www.cbse.site/sc/bm175

76. Which of the following is more acidic in nature?
- (a) Baking soda
 - (b) Lime water
 - (c) Lemon
 - (d) Apple

Sol : www.cbse.site/sc/bm176

77. Which one of following property of base is

incorrect?

- (a) Bases are bitter to taste.
- (b) Bases are soapy and slippery to touch.
- (c) Bases are not a good conductor of electricity.
- (d) None of these.

Sol : www.cbse.site/sc/bm177

78. On diluting a solution of $\text{pH} = 4.5$ its pH will
- (a) increases
 - (b) decreases
 - (c) remain same
 - (d) firstly increases then decreases

Sol : www.cbse.site/sc/bm178

79. In an experiment of pH paper four students takes the following observation?

Student	Sample	pH paper colour
A	Water	Blue
B	Dilute HCl	Red
C	Dilute NaOH	Blue
D	Dilute Ethanoic acid	Orange

Which student takes the incorrect observation?

- (a) B
- (b) C
- (c) D
- (d) A

Sol : www.cbse.site/sc/bm179

80. Which of the following acid is present in the vinegar?
- (a) Acetic acid
 - (b) Tartaric acid

To Purchase Hard Book of From Amazon Click Here.

For More Details Whatsapp at 8905629969

- (c) Lactic acid
(d) Citric acid

Sol : www.cbse.site/sc/bm180

81. Which of the following is not a acid?
(a) KOH
(b) HNO₃
(c) HCl
(d) H₂SO₄

Sol : www.cbse.site/sc/bm181

82. Which of the following is the synthetic indicator?
(a) Methyl orange
(b) Phenolphthalein
(c) China rose
(d) Both (a) and (b)

Sol : www.cbse.site/sc/bm182

83. indicator odour changes in acidic or basic media.
(a) Methyl orange
(b) Phenolphthalein
(c) Olfactory
(d) Ozonal

Sol : www.cbse.site/sc/bm183

84. Which of the following substance have maximum value of pH?
(a) Lemon
(b) Rain water
(c) Sea water
(d) Apple

Sol : www.cbse.site/sc/bm184

85. Consider the following table :

Substance	pH
Lemon	2.3
Battery acid	x
Sea water	8.5
Apple	3.1

The value of x in above table is:

- (a) 0
(b) 1.3
(c) 2.5
(d) 1.9

Sol : www.cbse.site/sc/bm185

86. Which of the following pair is incorrect?

	Substance	pH
(a)	Hydrochloric acid	1.0
(b)	Vinegar	2.8
(c)	Lime water	11
(d)	Stomach acid	1

Sol : www.cbse.site/sc/bm186

87. Which compound is formed due to the reaction of acid on metal oxides?
(a) Oxygen
(b) Nitrogen
(c) Salt
(d) Ammonia

Sol : www.cbse.site/sc/bm187

88. $2\text{NaCl} + (\text{dil})\text{H}_2\text{SO}_4 \longrightarrow \text{Na}_2\text{SO}_4 + Y$
Here Y is.
(a) Cl₂
(b) H₂
(c) 2HCl
(d) SO₂

Sol : www.cbse.site/sc/bm188

89. The chemical name of bleaching powder is:

- (a) Calcium oxychloride
- (b) Calcium chloride
- (c) Calcium carbonate
- (d) Calcium sulfate

Sol : www.cbse.site/sc/bm189

90. is obtained by heating of gypsum.

- (a) Bleaching powder
- (b) Plaster of paris
- (c) Banking soda
- (d) Sodium hydroxide

Sol : www.cbse.site/sc/bm190

91. is obtained by passing Cl_2 over dry slaked lime.

- (a) Plaster of paris
- (b) Bleaching powder
- (c) Banking soda
- (d) Washing soda

Sol : www.cbse.site/sc/bm191

92. Washing soda is obtained from carbonate.

- (a) Calcium
- (b) Sodium
- (c) Magnesium
- (d) Zinc

Sol : www.cbse.site/sc/bm192

93. Read the following statements:

- I. When a red litmus paper is dipped into the reaction mixture of a saponification reaction, it turns blue and the reaction

is exothermic.

II. When a blue litmus paper is dipped into the reaction mixture of a saponification reaction, its colour does not change and the reaction is exothermic.

III. When a red litmus paper is dipped into the reaction mixture of a saponification reaction, its colour does not change and the reaction is endothermic.

IV. When a blue litmus paper is dipped into the reaction mixture of a saponification reaction, its colour does not change and the reaction is endothermic.

Which of the above statements are correct?

- (a) I and II
- (b) II and III
- (c) III and IV
- (d) I and IV

Sol : www.cbse.site/sc/bm193

94. A student prepared 20% sodium hydroxide solution in a beaker containing water. The observations noted by him are given below.

I. Sodium hydroxide is in the form of pellets.

II. It dissolves in water readily.

III. The beaker appears cold when touched from outside.

IV. Red litmus paper turns blue when dipped into the solution.

The correct observations are:

- (a) I, II and III
- (b) II, III and IV
- (c) III, IV and I
- (d) I, II and IV

Sol : www.cbse.site/sc/bm194

95. Hard water required for an experiment is not available in a school laboratory. However, following salts are available in the laboratory. Select the salts which may be dissolved in water to make it hard for

To Purchase Hard Book of From Amazon Click Here.

For More Details Whatsapp at 8905629969

the experiment.

1. Calcium Sulphate
2. Sodium Sulphate
3. Calcium Chloride
4. Potassium Sulphate
5. Sodium Hydrogen Carbonate
6. Magnesium Chloride

- (a) 1, 2 and 4
- (b) 1, 3 and 6
- (c) 3, 5 and 6
- (d) 2, 4 and 5

Sol : www.cbse.site/sc/bm195

- 96.** In an experiment to study the properties of acetic acid, a student takes about 2 ml of acetic acid in a dry test tube. He adds about 2 ml of water to it and shakes the test tube well. What will he observe ?

- (a) The acetic acid dissolves readily in water.
- (b) The solution becomes light orange.
- (c) Water floats over the surface of acetic acid.
- (d) Acetic acid floats over the surface of water.

Sol : www.cbse.site/sc/bm196

- 97.** A student takes 2 ml acetic acid in a dry test tube and adds a pinch of sodium hydrogen carbonate to it. He makes the following observations:

- I. A colourless and odourless gas evolves with a brisk effervescence.
- II. The gas turns lime water milky when passed through it.
- III. The gas burns with an explosion when a burning splinter is brought near it.
- IV. The gas extinguishes the burning splinter which is brought near it.

The correct observations are:

- (a) I, II and III
- (b) II, III and IV

- (c) III, IV and I
- (d) IV, I and II

Sol : www.cbse.site/sc/bm197

- 98.** We need 20% aqueous solution of sodium hydroxide for the study of saponification reaction. When we open the lid of the bottle containing solid sodium hydroxide we observe it in which form?

- (a) Colourless transparent beads
- (b) Small white beads
- (c) White pellets/flakes
- (d) Fine white powder

Sol : www.cbse.site/sc/bm198

- 99.** In a locality, hard water, required for an experiment, is not available. However, the following salts are available in the school laboratory:

1. Sodium sulphate
2. Calcium sulphate
3. Magnesium chloride
4. Sodium chloride
5. Calcium chloride
6. Potassium sulphate

Which of the above may be dissolved in water to obtain hard water for the experiment?

- (a) 2, 3 and 5
- (b) 1, 2 and 5
- (c) 1, 2, 4 and 6
- (d) 3 and 5 only

Sol : www.cbse.site/sc/bm199

- 100.** What do we observe on pouring acetic acid on red and blue litmuts papers?

- (a) Red litmus remains red and blue litmus turns red.
- (b) Red litmus turns blue and blue litmus remains blue.

To Purchase Hard Book of From Amazon Click Here.

For More Details Whatsapp at 8905629969

- (c) Red litmus turns blue and blue litmus turns red.
- (d) Red litmus becomes colourless and blue litmus remains blue.

Sol : www.cbse.site/sc/bm200

101. A student takes about 6 ml of distilled water in each of the four test tubes *A*, *B*, *C* and *D*, then dissolves in equal amount four different salts name sodium chloride in *A* Potassium Chloride in *B*, Calcium Chloride in *C* and magnesium chloride in *D*. He then adds 10 drop of soap solution to each test tube and shakes its contents. The test tube(s) in which he would observe a good amount of lather is:

- (a) *A* and *B*
- (b) Only *A*
- (c) *C* and *D*
- (d) Only *B*

Sol : www.cbse.site/sc/bm201

102. Hard water is not available for an experiment in the school and its vicinity. However, some salts as given below are available in the school laboratory.

1. Sodium Chloride
2. Sodium Sulphate
3. Calcium Chloride
4. Calcium Sulphate
5. Potassium Chloride
6. Magnesium Sulphate

Select form the following a group of these salts, each member of which may be dissolved in water to make it hard.

- (a) 1, 2, 5
- (b) 1, 3, 5
- (c) 3, 4, 6
- (d) 2, 4, 6

Sol : www.cbse.site/sc/bm202

103. The pH of soft drink is and they are

- (a) less than 7, acidic
- (b) more than 7, basic
- (c) equal to 7, neutral
- (d) less than 7, basic

Sol : www.cbse.site/sc/bm203

104. When acidified potassium dichromate solution is added to a jar containing sulphur dioxide gas, the solution becomes:

- (a) colourless
- (b) brown
- (c) dark orange
- (d) green

Sol : www.cbse.site/sc/bm204

105. When you add a few drops of acetic acid to a test-tube containing sodium bicarbonate powder, which one of the following is your observation?

- (a) No reaction takes place.
- (b) A colourless gas with pungent smell is released with brisk effervescence.
- (c) A brown coloured gas is released with brisk effervescence.
- (d) Formation of bubbles of a colourless and odourless gas.

Sol : www.cbse.site/sc/bm205

106. A student require hard water for an experiment in his laboratory which is not available in the neighbouring area. In the laboratory there are some salts, which when dissolved in distilled water can convert it into hard water. Select from the following groups of salts, a group, each salt of which when dissolved in distilled water will make it hard.

- (a) Sodium chloride, Potassium chloride

To Purchase Hard Book of From Amazon Click Here.

For More Details Whatsapp at 8905629969

- (b) Sodium sulphate, Potassium sulphate
- (c) Sodium sulphate, Calcium sulphate
- (d) Calcium sulphate, Calcium chloride

Sol : www.cbse.site/sc/bm206

107. To a sample of turmeric adulterated with metanil yellow, concentrated hydrochloric acid was added. The colour of the reaction mixture

- (a) became green
- (b) became blue
- (c) remained the same
- (d) disappeared

Sol : www.cbse.site/sc/bm207

108. Which one of the following is used in manufacturing of ammonia?

- (a) Washing soda
- (b) Bleaching powder
- (c) Plaster of paris
- (d) Hydrogen gas

Sol : www.cbse.site/sc/bm208

109. Which of the following acid present in curd?

- (a) Acetic acid
- (b) Citric acid
- (c) Oxalic acid
- (d) Lactic acid

Sol : www.cbse.site/sc/bm209

110. Metal carbonate + acid → salt + Y + water
Here Y is:

- (a) carbon dioxide
- (b) carbon monoxide
- (c) carbon chloride
- (d) metal oxide

Sol : www.cbse.site/sc/bm210

111. When acid and base is mixed together than which of the following is formed?

- (a) Salt
- (b) Base
- (c) Acid
- (d) Hydrogen

Sol : www.cbse.site/sc/bm211

112. Mixing of an acid or base with water is known as

- (a) dilution
- (b) neutralisation
- (c) indicators
- (d) offertory inductors

Sol : www.cbse.site/sc/bm212

113. Which one of the following is used for bleaching cotton and linen in textile industry?

- (a) Caustic soda
- (b) Bleaching powder
- (c) Baking soda
- (d) Washing soda

Sol : www.cbse.site/sc/bm213

114. When electricity is passed through an aqueous solution of sodium chloride than is formed.

- (a) Sodium hydroxide
- (b) Sodium sulphate
- (c) Sodium chloride
- (d) Sodium bicarbonate

Sol : www.cbse.site/sc/bm214

115. When a few drops of liquid X were added to distilled water. It was observed that the pH of water decreased. The liquid sample

X is:

- (a) acid
- (b) base
- (c) salt
- (d) mixture of salt and acid

Sol : www.cbse.site/sc/bm215

116. Which of following solution have a higher concentration of H^+ ions?

- (a) 1 M HCl solution
- (b) 1 M CH_3COOH solution
- (c) 0.5 M CH_3COOH solution
- (d) None of these

Sol : www.cbse.site/sc/bm216

117. Arrange the following in the increasing order of pH values.

- A. NaOH solution
 - B. Blood
 - C. Lemon juice
 - D. Milk of magnesia
- (a) $C < B < D < A$
 - (b) $A < B < C < D$
 - (c) $D < C < B < A$
 - (d) $A < B < D < C$

Sol : www.cbse.site/sc/bm217

118. Which of following tablets are used by a person suffering from acidity?

- (a) Antacid
- (b) Antabuse
- (c) Antasalt
- (d) None of these

Sol : www.cbse.site/sc/bm218

119. When 2 mL of sodium hydroxide solution is added to a few pieces of granulated zinc metal taken in test tube. When the contents

are warmed, a gas evolves which is bubbled through a soap solution before testing.

The name of the gas is:

- (a) Hydrogen
- (b) Oxygen
- (c) Nitrogen
- (d) Helium

Sol : www.cbse.site/sc/bm219

120. A student take a small amount of copper oxide in a beaker and dilute hydrochloric acid slowly while stirring.

Which of the following product is formed in above process?

- (a) $CuCl_2$
- (b) $CuCa$
- (c) $CuMg_2$
- (d) $CuCOH$

Sol : www.cbse.site/sc/bm220

121. Which of the following property is incorrect for acid?

- (a) Acid have sour taste.
- (b) Acid are corrosive to metals.
- (c) Acid change red litmus paper to blue.
- (d) Acid become less acidic on mixing with bases.

Sol : www.cbse.site/sc/bm221

122. Which of the following pair is incorrect?

	Acid	Source
(a)	Ascorbic acid	All citrus fruits
(b)	Malic acid	Pears
(c)	Formic acid	Ant stings
(d)	Acetic acid	Milk

Sol : www.cbse.site/sc/bm222

To Purchase Hard Book of From Amazon Click Here.

For More Details Whatsapp at 8905629969

123. Which of the following is the organic acids?

- (a) HCl
- (b) HNO₃
- (c) H₂SO₄
- (d) CH₃COOH

Sol : www.cbse.site/sc/bm223

124. Arrange the following acids on their basicity in the table:

A = HCl, B = HNO₃, C = H₃PO₄

	Type of acid	Acid
1.	Monobasic	
2.	Dibasic	
3.	Tribasic	

- (a) 1-A, 2-B, 3-C
- (b) 1-C, 2-B, 3-A
- (c) 1-A, 2-C, 3-B
- (d) 1-B, 2-C, 3-A

Sol : www.cbse.site/sc/bm224

125. is used in bathing soaps.

- (a) Sodium hydroxide
- (b) Potassium hydroxide
- (c) Magnesium hydroxide
- (d) Ammonium hydroxide

Sol : www.cbse.site/sc/bm225

126. Which of following in not a natural indicator?

- (a) Red cabbage
- (b) China rose
- (c) Turmeric
- (d) Onion

Sol : www.cbse.site/sc/bm226

127. An acid produces ions in water.

- (a) Hydrogen
- (b) Helium
- (c) OH⁻
- (d) None of these

Sol : www.cbse.site/sc/bm227

128. Which of the following is the strong acid?

- (a) CH₃COOH
- (b) HCN
- (c) HBr
- (d) HF

Sol : www.cbse.site/sc/bm228

129. Which of the following pair is not correct?

	Acid	Example
(a)	Monobasic acid	HNO ₃
(b)	Dibasic acid	H ₃ PO ₃
(c)	Tribasic acid	H ₃ PO ₄
(d)	Monobasic acid	H ₂ SO ₄

Sol : www.cbse.site/sc/bm229

130. acid is used in car battery.

- (a) Nitric
- (b) Sulphuric
- (c) Carbonic
- (d) Tartaric

Sol : www.cbse.site/sc/bm230

131. A body wanted to remove the grease stain from our shirt. So he used a X solution. Here X solution is:

- (a) Ammonium hydroxide
- (b) Magnesium hydroxide
- (c) Calcium hydroxide
- (d) Sodium hydroxide

To Purchase Hard Book of From Amazon Click Here.

For More Details Whatsapp at 8905629969

Sol : www.cbse.site/sc/bm231

132. Which of the following is the correct for dilution of acid and base?

- (a) Acid or base added to water.
- (b) Water is added to acid or base.
- (c) Water is added drop by drop to acid or base.
- (d) Water cannot be added in acid or base.

Sol : www.cbse.site/sc/bm232

133. The acidic solution is the one in which the concentration of is greater than that of ions.

- (a) H^+, OH^-
- (b) DH^-, H^+
- (c) H_3O^+, H^+
- (d) H^+, H_3O^+

Sol : www.cbse.site/sc/bm233

134. The hydrogen ion concentration of solution is 0.001 M. The pH of solution is?

- (a) 3
- (b) 2
- (c) 1
- (d) 1.5

Sol : www.cbse.site/sc/bm234

135. The hydrogen ion concentration of a solution is 1.0×10^{-9} M. The pH of the solution is:

- (a) 10
- (b) 9
- (c) 11
- (d) 8

Sol : www.cbse.site/sc/bm235

136. The hydroxyl ion concentration of a solution is 0.001 M. The pH of the solution is:

- (a) 11
- (b) 12
- (c) 13
- (d) 14

Sol : www.cbse.site/sc/bm236

137. The hydroxyl ion concentration of a solution is 1.0×10^{-9} M. The pH of the solution is:

- (a) 4
- (b) 5
- (c) 6
- (d) 7

Sol : www.cbse.site/sc/bm237

138. Which of the following statement is incorrect about acids?

- (a) they change the colour of red litmus to blue
- (b) they have sour taste
- (c) they may change the colour of indicator
- (d) they changes the colour or blue litmus to red

Sol : www.cbse.site/sc/bm238

139. When $Ca(OH)_2$ reacts with $CO_2(g)$, it will give $CaCO_3(s)$ and $H_2O(l)$. The nature of $CaCO_3$ is

- (a) acidic
- (b) basic
- (c) neutral
- (d) All are possible

Sol : www.cbse.site/sc/bm239

140. The correct statement regarding universal

indicator is

- (a) it gives orange colour at $\text{pH} = 3$
- (b) it becomes colourless at $\text{pH} = 7$
- (c) it is an indicator having $\text{pH} = 7$
- (d) it gives blue colour at $\text{pH} = 3$

Sol : www.cbse.site/sc/bm240

141. When NaOH and HCl are mixed in equal molar quantities, the result is

- (a) the formation of salt + H_2O
- (b) the formation of salt + $\text{H}_2(\text{g})$
- (c) the formation of salt + $\text{O}_2(\text{g})$
- (d) All above are correct

Sol : www.cbse.site/sc/bm241

142. Aqueous solution of copper sulphate reacts with aqueous ammonium hydroxide solution to give.

- (a) green precipitate
- (b) brown precipitate
- (c) pale blue precipitate
- (d) white precipitate

Sol : www.cbse.site/sc/bm242

143. The organic acid present in tomato is

- (a) oxalic acid
- (b) lactic acid
- (c) malic acid
- (d) tartaric acid

Sol : www.cbse.site/sc/bm243

144. You are having five solutions P, Q, R, S and T with pH values as follows:

$P = 1.8, Q = 7, R = 8.5, S = 8$ and $T = 5$

Which solution would be most likely to liberate hydrogen with magnesium powder?

- (a) Solution P and Q

(b) Solution P

(c) Solution R

(d) All of the above

Sol : www.cbse.site/sc/bm244

145. The reagent used to distinguish iron (II) chloride and iron (III) chloride is

- (a) Warm water
- (b) distilled water
- (c) NaOH
- (d) dil. HCl

Sol : www.cbse.site/sc/bm245

146. An acid (P) with sodium hydrogen carbonate is used in making the cakes fluffy and spongy. It is due to the release of (Q) gas in the reaction. Here, P and Q are

- (a) P : Tartaric acid : Q : CO_2
- (b) P : Succinic acid : Q : H_2
- (c) P : Tartaric acid : Q : O_2
- (d) P : Oxalic acid : Q : CO_2

Sol : www.cbse.site/sc/bm246

147. The pH of a solution is 4.5. What should be the change in the hydrogen ion concentration of the solution, if its pH is to increased to 6.

- (a) increases by 10 times
- (b) doubled
- (c) halved
- (d) decreases to $1/10$ of its original concentration

Sol : www.cbse.site/sc/bm247

148. The pH of a solution is 6. Its hydrogen ion concentration is decreased by 100 times, the solution will be :

- (a) more acidic

To Purchase Hard Book of From Amazon Click Here.

For More Details Whatsapp at 8905629969

- (b) basic
- (c) neutral
- (d) unaffected

Sol : www.cbse.site/sc/bm248

- (b) NaCl
- (c) HCl
- (d) LiCl

Sol : www.cbse.site/sc/bm252

149. Bleaching powder is soluble in cold water giving a milky solution due to-

- (a) The absorption of carbon dioxide from atmosphere
- (b) available chlorine
- (c) lime present in it
- (d) calcium carbonate formation

Sol : www.cbse.site/sc/bm249

150. A blue litmus paper was first dipped in dil. HCl and then in dil. NaOH solution. It was observed that the colour of the litmus paper-

- (a) remains blue in both the solutions
- (b) changed to red
- (c) changed first to red and then to blue
- (d) changed blue to colourless

Sol : www.cbse.site/sc/bm250

151. Bleaching powder gives smell of chlorine because it-

- (a) contains excess of chlorine
- (b) is a mixture of chlorine and slaked lime
- (c) is unstable
- (d) gives chlorine on exposure to atmosphere

Sol : www.cbse.site/sc/bm251

152. A solution reacts with crushed egg-shells to give a gas that turns lime-water milky. The solution contains

- (a) KCl

153. Assertion : Olfactory indicators are those whose colour changes in acidic and basic medium.

Reason : They react with acidic and basic solutions.

- (a) Both Assertion and Reason are true and Reason is the correct explanation of the Assertion.
- (b) Both Assertion and Reason are true but Reason is not the correct explanation of the Assertion.
- (c) Assertion is true but the Reason is false.
- (d) Both Assertion and Reason are false.

Sol : www.cbse.site/sc/bm253

154. Assertion : Active metals react with acids to liberate Hydrogen gas.

Reason : It is an example of displacement reaction.

- (a) Both Assertion and Reason are true and Reason is the correct explanation of the Assertion.
- (b) Both Assertion and Reason are true but Reason is not the correct explanation of the Assertion.
- (c) Assertion is true but the Reason is false.
- (d) Both Assertion and Reason are false.

Sol : www.cbse.site/sc/bm254

155. Assertion : Acids contain H^+ ions.

Reason : H^+ ions neutralise acids.

- (a) Both Assertion and Reason are true and Reason is the correct explanation

To Purchase Hard Book of From Amazon Click Here.

For More Details Whatsapp at 8905629969

of the Assertion.

- (b) Both Assertion and Reason are true but Reason is not the correct explanation of the Assertion.
- (c) Assertion is true but the Reason is false.
- (d) Both Assertion and Reason are false.

Sol : www.cbse.site/sc/bm255

156. Assertion : The process of dissolving an acid or a base in water is a highly exothermic one.

Reason : A large amount of heat is produced.

- (a) Both Assertion and Reason are true and Reason is the correct explanation of the Assertion.
- (b) Both Assertion and Reason are true but Reason is not the correct explanation of the Assertion.
- (c) Assertion is true but the Reason is false.
- (d) Both Assertion and Reason are false.

Sol : www.cbse.site/sc/bm256

157. Assertion : On heating, colour of hydrated copper sulphate changes from blue to white.

Reason : Copper sulphate is a crystalline salt.

- (a) Both Assertion and Reason are true and Reason is the correct explanation of the Assertion.
- (b) Both Assertion and Reason are true but Reason is not the correct explanation of the Assertion.
- (c) Assertion is true but the Reason is false.
- (d) Both Assertion and Reason are false.

Sol : www.cbse.site/sc/bm257

158. Assertion : Plaster of Paris is obtained on

heating gypsum at 373K.

Reason : On heating gypsum at 373K, it loses water molecules.

- (a) Both Assertion and Reason are true and Reason is the correct explanation of the Assertion.
- (b) Both Assertion and Reason are true but Reason is not the correct explanation of the Assertion.
- (c) Assertion is true but the Reason is false.
- (d) Both Assertion and Reason are false.

Sol : www.cbse.site/sc/bm258

159. Assertion : Salts of strong acids and weak bases are basic in nature.

Reason : pH value of such salt are more than 7.

- (a) Both Assertion and Reason are true and Reason is the correct explanation of the Assertion.
- (b) Both Assertion and Reason are true but Reason is not the correct explanation of the Assertion.
- (c) Assertion is true but the Reason is false.
- (d) Both Assertion and Reason are false.

Sol : www.cbse.site/sc/bm259

160. Assertion : When acid rain flows into the river, it lowers the pH of the river water.

Reason : The survival of aquatic life in such river becomes difficult.

- (a) Both Assertion and Reason are true and Reason is the correct explanation of the Assertion.
- (b) Both Assertion and Reason are true but Reason is not the correct explanation of the Assertion.
- (c) Assertion is true but the Reason is false.

To Purchase Hard Book of From Amazon Click Here.

For More Details Whatsapp at 8905629969

(d) Both Assertion and Reason are false.

Sol : www.cbse.site/sc/bm260

161. Assertion : Limestone, chalk and marble react with acids to form salt, carbon dioxide and water.

Reason : Limestone, chalk and marble are different forms of calcium carbonate.

- (a) Both Assertion and Reason are true and Reason is the correct explanation of the Assertion.
 (b) Both Assertion and Reason are true but Reason is not the correct explanation of the Assertion.
 (c) Assertion is true but the Reason is false.
 (d) Both Assertion and Reason are false.

Sol : www.cbse.site/sc/bm261

162. Assertion : In a neutralisation reaction, metal and non-metal react to form salt.

Reason : Metal contains H^+ ions and non-metal OH^- ions.

- (a) Both Assertion and Reason are true and Reason is the correct explanation of the Assertion.
 (b) Both Assertion and Reason are true but Reason is not the correct explanation of the Assertion.
 (c) Assertion is true but the Reason is false.
 (d) Both Assertion and Reason are false.

Sol : www.cbse.site/sc/bm262

163. Assertion : Non-metallic oxides are acidic in nature.

Reason : Non-metallic oxides react with base to form salt and water just like an acid reacts with a base.

- (a) Both Assertion and Reason are true

and Reason is the correct explanation of the Assertion.

- (b) Both Assertion and Reason are true but Reason is not the correct explanation of the Assertion.
 (c) Assertion is true but the Reason is false.
 (d) Both Assertion and Reason are false.

Sol : www.cbse.site/sc/bm263

164. Assertion : HCl produces hydronium ions (H_3O^+) and chloride ions (Cl^-) in aqueous solution.

Reason : In presence of water, base give H^+ ions.

- (a) Both Assertion and Reason are true and Reason is the correct explanation of Assertion.
 (b) Both Assertion and Reason are true but reason is not the correct explanation of Assertion.
 (c) Assertion is true but Reason is false.
 (d) Assertion is false but Reason is true.

Sol : www.cbse.site/sc/bm264

165. Assertion : If the pH inside the mouth decreases below 5.5, the decay of tooth enamel begins.

Reason : The bacteria present in mouth degrades the sugar and left over food particles and produce acids that remains in the mouth after eating.

- (a) Both Assertion and Reason are true and Reason is the correct explanation of Assertion.
 (b) Both Assertion and Reason are true but Reason is not the correct explanation of Assertion.
 (c) Assertion is true but Reason is false.
 (d) Assertion is false but Reason is true.

Sol : www.cbse.site/sc/bm265

To Purchase Hard Book of From Amazon Click Here.

For More Details Whatsapp at 8905629969

166. Assertion : H_2CO_3 is a strong acid.

Reason : A strong acid dissociates completely or almost completely in water.

- (a) Both Assertion and Reason are true and Reason is the correct explanation of Assertion.
- (b) Both Assertion and Reason are true but Reason is not the correct explanation of Assertion.
- (c) Assertion is true but Reason is false.
- (d) Assertion is false but Reason is true.

Sol : www.cbse.site/sc/bm266

167. Assertion : Salts are the products of an acid-base reaction.

Reason : Salt may be acidic or basic.

- (a) Both Assertion and Reason are true and Reason is the correct explanation of Assertion.
- (b) Both Assertion and Reason are true but Reason is not the correct explanation of Assertion.
- (c) Assertion is true but Reason is false.
- (d) Assertion is false but Reason is true.

Sol : www.cbse.site/sc/bm267

168. Assertion : On adding H_2SO_4 to water the resulting aqueous solution get corrosive.

Reason : Hydronium ions are responsible for corrosive action.

- (a) Both Assertion and Reason are true and Reason is the correct explanation of Assertion.
- (b) Both Assertion and Reason are true but Reason is not the correct explanation of Assertion.
- (c) Assertion is true but Reason is false.
- (d) Assertion is false but Reason is true.

Sol : www.cbse.site/sc/bm268

169. Assertion : pH of ammonium chloride solution is in acidic range.

Reason : Solution of a salt of weak base and strong acid is acidic.

- (a) Both Assertion and Reason are true and Reason is the correct explanation of Assertion.
- (b) Both Assertion and Reason are true but Reason is not the correct explanation of Assertion.
- (c) Assertion is true but Reason is false.
- (d) Assertion is false but Reason is true.

Sol : www.cbse.site/sc/bm269

170. Assertion : Baking soda does not creates acidity in the stomach.

Reason : Baking soda is not alkaline.

- (a) Both Assertion and Reason are true and Reason is the correct explanation of Assertion.
- (b) Both Assertion and Reason are true but Reason is not the correct explanation of Assertion.
- (c) Assertion is true but Reason is false.
- (d) Assertion is true but Reason is false

Sol : www.cbse.site/sc/bm270

171. Assertion : Plaster of Paris is used by doctors by setting fractured bones.

Reason : When Plaster of Paris is mixed with water and applied around the fractured limbs, it sets into a hard mass.

- (a) Both Assertion and Reason are true and Reason is the correct explanation of Assertion.
- (b) Both Assertion and Reason are true but Reason is not the correct explanation of Assertion.
- (c) Assertion is true but Reason is false.
- (d) Assertion is false but Reason is true.

Sol : www.cbse.site/sc/bm271

To Purchase Hard Book of From Amazon Click Here.

For More Details Whatsapp at 8905629969

172. Assertion : Sodium hydroxide reacts with zinc to produce hydrogen gas.

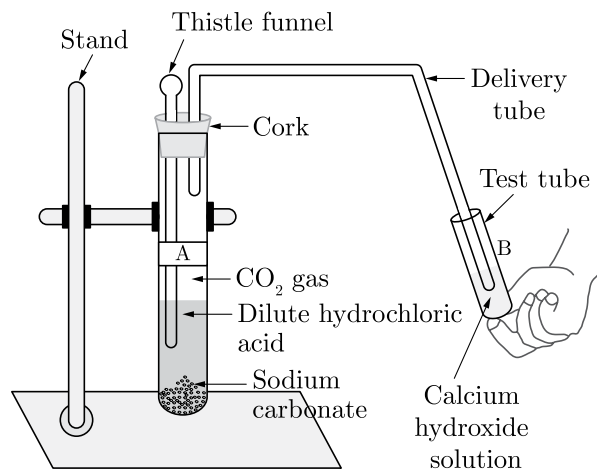
Reason : Acids reacts with active metals to produce hydrogen gas.

- (a) Both Assertion and Reason are true and Reason is the correct explanation of Assertion.
 (b) Both Assertion and Reason are true but Reason is not the correct explanation of Assertion.
 (c) Assertion is true but Reason is false.
 (d) Assertion is false but Reason is true.

Sol : www.cbse.site/sc/bm272

COMPETENCY BASED QUESTIONS

173. A student takes two test tube *A* and *B* and arrange the test tubes according to the figure:



Student takes about 0.5 g of sodium carbonate (Na_2CO_3) in test tube *A* and about 0.5 g of sodium hydrogen carbonate (NaHCO_3) in test tube *B*. After this student add about 2 ml of dilute HCl to both the test tubes.

Which of following gas is evolved in the

about experiment?

- (a) Carbon dioxide
 (b) Carbon monoxide
 (c) Oxygen
 (d) Carbon chloride

Sol : www.cbse.site/sc/bm273

Direction For Questions (175-176)

Take about 2 ml of dilute NaOH solution in a test tube and add two drops of phenolphthalein solution.

174. The colour of solution is:

- (a) Pink
 (b) Blue
 (c) Red
 (d) Green

Sol : www.cbse.site/sc/bm274

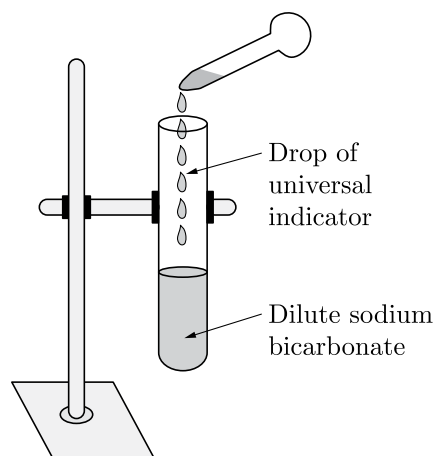
175. In the previous question, hydrochloric acid is mixed drop by drop. The colour of this solution is:

- (a) Pink
 (b) Blue
 (c) Red
 (d) Green

Sol : www.cbse.site/sc/bm274

176. A student adds a few drops of the universal indicator to a dilute solution of sodium

bicarbonate taken in a test tube.



The colour of mixture of universal indicator and dilute sodium bicarbonate is:

- (a) Green
- (b) Yellow
- (c) Violet
- (d) Blue

Sol : www.cbse.site/sc/bm275

177. A student placed a few drops of a liquid over a portion of the blue litmus paper as shown in figure. He observed that the blue litmus paper turned red. The liquid could be:

- (a) water
- (b) dilute sodium bicarbonate solution
- (c) dilute hydrochloric acid
- (d) dilute sodium hydroxide

Sol : www.cbse.site/sc/bm276

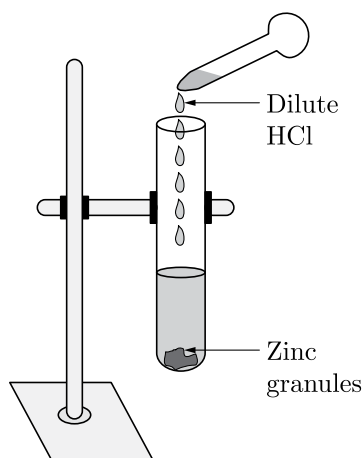
178. A student was provided with a pH chart by the teacher and asked to observe the colours corresponding to pH 1 and 14 respectively. The correct answer would be

- (a) yellow, green
- (b) violet, orange
- (c) red, blue

(d) blue, mustard

Sol : www.cbse.site/sc/bm277

179. A student added dilute HCl to Zn granules taken in a test tube as shown in figure. The correct observation would be:



- (a) no change
- (b) evolution of gas
- (c) Zn granules turned green
- (d) formation of a precipitate

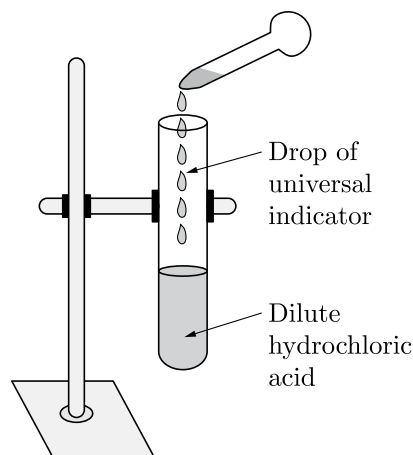
Sol : www.cbse.site/sc/bm278

Don't Take Printout of This File because this is not useful. You can purchase hard book from Amazon. Hard book includes explanation of all MCQs in print form.

180. A student adds a few drops of the universal indicator to a solution of dilute hydrochloric acid in the way shown in the figure. He would observe that the colour of the solution changes from colourless to:

To Purchase Hard Book of From Amazon Click Here.

For More Details Whatsapp at 8905629969



- (a) red
- (b) yellow
- (c) violet
- (d) green

Sol : www.cbse.site/sc/bm279

181. A student takes some zinc granules in a test tube and adds dilute hydrochloric acid to it. He would observe that the colour of the zinc granules changes to

- (a) Red
- (b) Black
- (c) Green
- (d) Yellow

Sol : www.cbse.site/sc/bm280

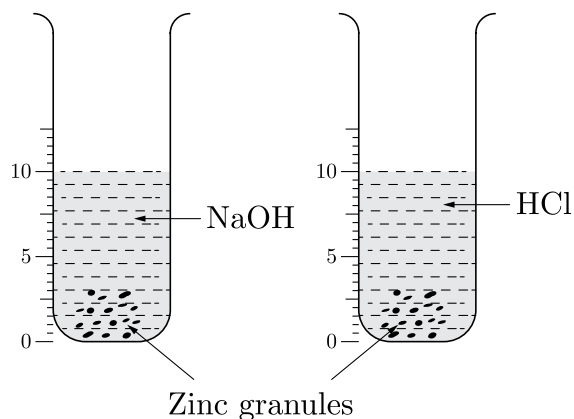
182. On putting few drops of an unknown liquid on pH strip, the colour of pH strip changed to green. The liquid taken is likely to be:

- (a) dilute sodium hydroxide solution
- (b) lemon juice
- (c) dilute hydrochloric acid
- (d) water

Sol : www.cbse.site/sc/bm281

183. 10 mL of HCl and 10 mL of NaOH solutions are contacted in two separate beakers,

labelled I and II respectively. On adding zinc granules to both as shown in figure, it is observed that at room temperature.



- (a) no gas is evolved in either of the two beakers.
- (b) gas is evolved in beaker II but not in beaker I.
- (c) gas is evolved vigorously in both.
- (d) gas is evolved vigorously in beaker I but not in beaker II.

Sol : www.cbse.site/sc/bm282

184. You have four test tubes, *P*, *Q*, *R*, and *S* containing sodium carbonate, sodium chloride, lime water and blue litmus solutions respective. Out of these the material of which test tube/test tubes would be suitable for the correct test of acetic/ethanoic acid.

- (a) Only *P*
- (b) *P* and *Q*
- (c) *R* and *S*
- (d) *P* and *S*

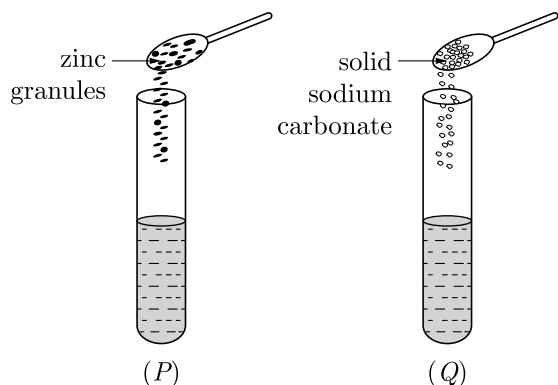
Sol : www.cbse.site/sc/bm283

185. A student took two test tubes containing 2 mL of dilute hydrochloric acid and added zinc granules to test tube (*P*) and solid sodium carbonate to test tube (*Q*) as

To Purchase Hard Book of From Amazon Click Here.

For More Details Whatsapp at 8905629969

shown below.

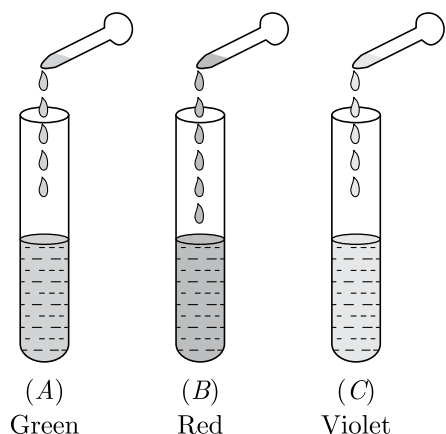


The correct observation would be

- (a) no reaction in any of the test tube
- (b) rapid reaction in both the test tubes
- (c) slow reaction in (P) and rapid reaction in (Q)
- (d) rapid reaction in (P) but a slow reaction in (Q)

Sol : www.cbse.site/sc/bm284

186. On adding a few drops of universal indicator to three unknown colourless solutions (A), (B) and (C), taken separately in three test tubes shown in the following diagrams, a student observed the changes in colour as green in (A), red in (B) and violet in (C).



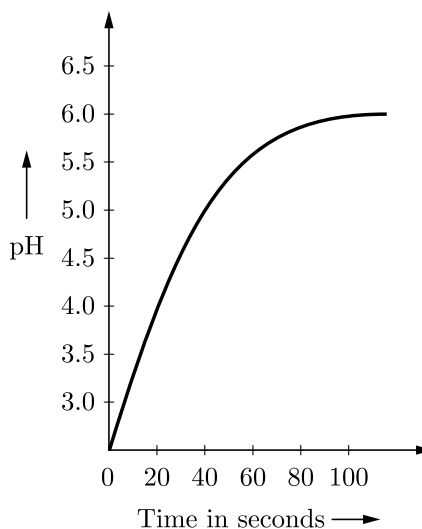
The decreasing order of pH of the solutions taken is

- (a) $A > B > C$
- (b) $C > A > B$
- (c) $B > A > C$
- (d) $C > B > A$

Sol : www.cbse.site/sc/bm285

Direction For Questions (188-192)

Mr. Ashok assumed that the time taken for 10 cm^3 of CO_2 to be formed from a reaction between equal volume of acid solutions and 1.0 g of calcium carbonate is affected by the pH of acid solution. Mr. Rajesh tested his hypothesis and represented his results is shown in the graph.



- 187.** What will happen at pH 6.5?
- (a) No reaction
 - (b) Reaction occur very fast
 - (c) Slow reaction
 - (d) CO_2 will evolve

Sol : www.cbse.site/sc/bm286

- 188.** What is the nature of CaCO_3 ?
- (a) Acidic salt
 - (b) Basic salt

To Purchase Hard Book of From Amazon Click Here.

For More Details Whatsapp at 8905629969

- (c) Amphoteric
- (d) Can't predict

Sol : www.cbse.site/sc/bm286

- 189.** According to graph, a more acidic solution will produce the gas:
- (a) can't predict
 - (b) more quickly
 - (c) less quickly
 - (d) at the same rate

Sol : www.cbse.site/sc/bm286

- 190.** What will be time taken to collect 10 cm^3 of CO_2 at $\text{pH} = 5.0$?
- (a) 20 seconds
 - (b) 40 seconds
 - (c) 50 seconds
 - (d) 50 seconds

Sol : www.cbse.site/sc/bm286

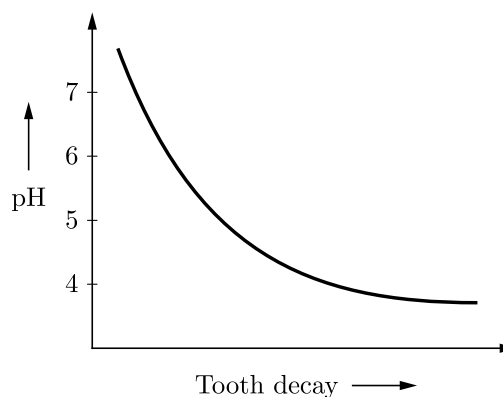
- 191.** Which of the following statements is correct about an aqueous solution of an acid and of a base?
1. Lower the pH, weaker the base
 2. Lower the pH, stronger the base
 3. Higher the pH, weaker the acid
 4. Higher the pH, stronger the acid
- (a) 1 and 3
 - (b) 2 and 3
 - (c) 1 and 4
 - (d) 2 and 4

Sol : www.cbse.site/sc/bm286

Direction For Questions (193-197)

Tooth decay starts when the pH of the mouth is lower than 5.5. Tooth enamel, made up of calcium phosphate is the hardest substance in the body. It does not dissolve in water,

but is corroded when the pH in the mouth is below 5.5. Bacteria present in the mouth produce acids by degradation of sugar and food particles remaining in the mouth after eating. The best way to prevent this is to clean the mouth after eating food. Using toothpastes, which are generally basic, for cleaning the teeth can neutralise the excess acid and prevent tooth decay.



- 192.** The tooth decay be prevented:
- (a) By rinsing mouth with excess of water after eating.
 - (b) By using basic toothpaste.
 - (c) Both (a) and (b)
 - (d) Preventing use of acidic substances like lemon etc.

Sol : www.cbse.site/sc/bm287

- 193.** Teeth enamel is made of a substance called:
- (a) Aluminium
 - (b) Calcium phosphate
 - (c) Iron
 - (d) Diamond

Sol : www.cbse.site/sc/bm287

- 194.** Tooth decay in the mouth starts when:
- (a) pH of mouth is below 5.5
 - (b) pH of mouth is 7.6

To Purchase Hard Book of From Amazon Click Here.

For More Details Whatsapp at 8905629969

- (c) pH of mouth is 7.5
- (d) pH of mouth is 7

Sol : www.cbse.site/sc/bm287

195. The acidity in the mouth is due to:

- (a) Undigestion of food.
- (b) Degradation of sugar and food particles remaining in mouth by bacteria.
- (c) Drinking of Mosambi juice.
- (d) Eating of acidic substances like tomatoes, orange etc.

Sol : www.cbse.site/sc/bm287

196. The hardest substance in the body is:

- (a) Tooth enamel
- (b) Lungs
- (c) Mouth
- (d) Trachea

Sol : www.cbse.site/sc/bm287

Direction For Questions (198-202)

Acidic solutions have excess of hydrogen ions. Even the acidic solutions contain hydroxide ions which come from the ionisation of water but the concentration of hydroxide ions in acidic solutions is much less than that of hydrogen ions.

The basic solution have excess of hydroxide ions. Even the basic solutions have hydrogen ions in them which come from the ionisation of water but the concentration of hydrogen ions in basic solutions is much less than that of hydroxide ions.

In 1909 Sorenson devised a scale (known as pH scale) on which the strength of acid solutions as well as basic solutions could be represented by making use of the hydrogen ion concentrations in them. Sorensen linked the hydrogen ion concentrations of acid and base solutions to the simple numbers 0 to

14 on his pH scale. The pH of a solution is inversely proportional to the concentration of hydrogen ions in it.

In everyday life, pH plays an important role on daily basis like in gardening and farming, the best crops are usually obtained with neutral or slightly acidic soil (pH 6.5 to 7.0), tooth decay starts when the pH of mouth is lower than 5.5. Bee-sting leaves an acid which causes pain and irritation etc.

197. Which of the following substance(s) is added by farmers if the soil is acidic?

- (a) Common salt
- (b) Slaked lime
- (c) Vinegar
- (d) Limestone

Sol : www.cbse.site/sc/bm288

198. Rain is called an acid rain when the pH is

- (a) above 8.5
- (b) below 6.5
- (c) below 5.6
- (d) between 7-8

Sol : www.cbse.site/sc/bm288

199. During indigestion, which acid is produced by the stomach that causes irritation and pain?

- (a) Hydrochloric acid
- (b) Sulphuric acid
- (c) Nitric acid
- (d) Phosphoric acid

Sol : www.cbse.site/sc/bm288

200. The basic salt that gives relief on the stung area is

- (a) washing soda

To Purchase Hard Book of From Amazon Click Here.

For More Details Whatsapp at 8905629969

- (b) caustic soda
- (c) baking soda
- (d) bleaching powder

Sol : www.cbse.site/sc/bm288

201. Which of the following type of medicines is used for the treatment of hyperacidity in the stomach?

- (a) Antiseptic
- (b) Antibiotic
- (c) Analgesic
- (d) Antacid

Sol : www.cbse.site/sc/bm288

Direction For Questions (203-207)

The acids are sour in taste while bases are bitter in taste. Tasting a substance is not a good way of finding out if it is an acid or a base. Acids and bases can be better distinguished with the help of indicators. Indicators are substances that undergo a change of colour with a change of acidic, neutral or basic medium. Many of these indicators are derived from natural substances such as extracts from flower petals and barrier. Some indicators are prepared artificially. For example, methyl orange and phenolphthalein.

202. When a few drops of phenolphthalein is added to a solution having pH 8.5, then the colour

- (a) changes to blue
- (b) changes to red
- (c) changes to pink
- (d) does not change

Sol : www.cbse.site/sc/bm289

203. The colour observed when methyl orange is

added to an acid is

- (a) pinkish red
- (b) blue
- (c) orange
- (d) yellow

Sol : www.cbse.site/sc/bm289

204. Which of the following statement(s) is incorrect about the litmus paper?

- (a) It is a most commonly used indicator.
- (b) In acidic solution, blue litmus paper turns red.
- (c) In neutral solution, no colour change is observed.
- (d) Litmus solution is a yellow dye, which is extracted from the lichen plant.

Sol : www.cbse.site/sc/bm289

205. Which solution will change blue litmus to red?

- (a) NaOH(aq)
- (b) NH₄OH(aq)
- (c) KCl(aq)
- (d) H₂SO₄(aq)

Sol : www.cbse.site/sc/bm289

206. Which of the following solutions will turn phenolphthalein pink?

- (a) HCl(aq)
- (b) CO₂(aq)
- (c) KOH(aq)
- (d) H₂SO₄(aq)

Sol : www.cbse.site/sc/bm289

Direction For Questions (208-212)

Baking soda is also called sodium bicarbonate. This is the major constituent

To Purchase Hard Book of From Amazon Click Here.

For More Details Whatsapp at 8905629969

of baking powder.

Sodium chloride is used as one of the raw materials in the production of baking soda. Baking soda is commonly used to make crispy pakoras, etc., in the kitchen. It is also added for faster cooking. It is also used in the preparation of effervescent drinks and fruit salts and it is used as an antacid, it neutralises excess acid in the stomach.

- 207.** The chemical name of baking soda is
- sodium hydrogen carbonate
 - sodium hydroxide
 - sodium carbonate decahydrate
 - calcium oxychloride

Sol : www.cbse.site/sc/bm290

- 208.** Which of the following statements is correct regarding properties of baking soda?
- It is a yellow crystalline substance.
 - It is non-corrosive in nature.
 - It reacts with acids evolving hydrogen gas.
 - All are correct

Sol : www.cbse.site/sc/bm290

- 209.** The temperature above which sodium bicarbonate decomposes to give sodium carbonate is
- 283 K
 - 309 K
 - 373 K
 - 575 K

Sol : www.cbse.site/sc/bm290

- 210.** Baking powder is a mixture of
- sodium carbonate and ethanoic acid
 - sodium hydrogen carbonate and ethanoic acid

- sodium carbonate and tartaric acid
- sodium hydrogen carbonate and tartaric acid

Sol : www.cbse.site/sc/bm290

- 211.** The chemical formula of baking soda is
- NaHCO_3
 - NaOH
 - $\text{Na}_2\text{CO}_3 \cdot 10\text{H}_2\text{O}$
 - CaOCl_2

Sol : www.cbse.site/sc/bm290

Direction For Questions (213-217)

The pH of a solution is a measure of its hydrogen ion (H^+) concentration. It is measured generally using pH scale. The values on pH scale ranges from 0 to 14.

A pH of 1 is very acidic and corresponds to a high concentration of H^+ ions. A pH of 14 is very basic and corresponds to a low concentration of H^+ ions. The pH of a neutral solution is 7. The table given below shows the pH and H^+ ion concentration of some common aqueous solutions. The leftmost column shows the number of moles of H^+ ions in 1 mole of liquid.

The pH and Hydrogen ion (H^+) Concentration of Some Solutions

H^+ Concentration (Moles)	pH	Solution
10^{-1}	1	
10^{-2}	2	Gastric (stomach) juice, cola, lemon juice
10^{-3}	3	Vinegar
10^{-4}	4	Tomato juice
10^{-5}	5	Black coffee, rain water

To Purchase Hard Book of From Amazon Click Here.

For More Details Whatsapp at 8905629969

The pH and Hydrogen ion (H^+)
Concentration of Some Solutions

H^+ Concentration (Moles)	pH	Solution
10^{-6}	6	Urine
10^{-7}	7	Pure water
10^{-8}	8	Sea water
10^{-9}	9	Baking soda
10^{-10}	10	
10^{-11}	11	Milk of magnesia
10^{-12}	12	Household bleach
10^{-13}	13	Oven cleaner
10^{-14}	14	

212. How is the hydrogen ion concentration and pH related to each other?

- (a) They are inversely proportional
- (b) They are directly proportional
- (c) They are equal
- (d) They have no relation

Sol : www.cbse.site/sc/bm291

213. Among the given solutions in the above table, the most basic in nature is

- (a) pure water
- (b) oven cleaner
- (c) household bleach
- (d) gastric juice

Sol : www.cbse.site/sc/bm291

214. The acid having highest hydrogen ion concentration is one with

- (a) pH = 2.5
- (b) pH = 1.8
- (c) pH = 7
- (d) pH = 10

Sol : www.cbse.site/sc/bm291

215. Which of the following acids is used in making of vinegar?

- (a) Nitric acid
- (b) Sulphuric acid
- (c) Formic acid
- (d) Acetic acid

Sol : www.cbse.site/sc/bm291

216. A basic solution could have a pH of

- (a) 11
- (b) 7
- (c) 1
- (d) 2

Sol : www.cbse.site/sc/bm291

Direction For Questions (218-222)

A student takes the three solutions P , Q and R and make the reaction of all these solution with phenolphthalein indicator and methyl orange indicator. He get the following result:

Solutions	Colour change with phenolphthalein indicator	Colour change with methyl orange indicator
P	Pink	Yellow
Q	Colourless	Orange
R	Colourless	Red

217. The acidic solution is

- (a) P
- (b) Q
- (c) R
- (d) None of these

To Purchase Hard Book of From Amazon Click Here.

For More Details Whatsapp at 8905629969

Sol : www.cbse.site/sc/bm292

218. The increasing of pH of solution P , Q and R is

- (a) $P < Q < R$
- (b) $R < P < Q$
- (c) $R < Q < P$
- (d) $Q < R < P$

Sol : www.cbse.site/sc/bm292

219. Solutions P and Q could be

- (a) HCl and NaOH
- (b) NaOH and NaCl
- (c) CH_3COOH and CH_3COONa
- (d) HCl and Na_2CO_3

Sol : www.cbse.site/sc/bm292

220. When solution P added to the China rose indicator, the colour of the solution P changes to

- (a) Green
- (b) Dark red
- (c) Pink
- (d) Colourless

Sol : www.cbse.site/sc/bm292

221. The solution which give pink colour after reaction with phenolphthalein indicator is

- (a) P
- (b) Q
- (c) R
- (d) None of these

Sol : www.cbse.site/sc/bm292

Direction For Questions (223-227)

In pure water, the concentrations of

hydrogen ions and hydroxide ions are equal. Due to this, pure water is neither acidic nor basic, it is neutral.

Acidic solutions have excess of hydrogen ions. Even the acidic solutions contain hydroxide ions which come from the ionisation of water but the concentration of hydroxide ions in acidic solutions is much less than that of hydrogen ions.

The basic solution have excess of hydroxide ions. Even the basic solutions have hydrogen ions in them which come from the ionisation of water but the concentration of hydrogen ions in basic solutions is much less than that of hydroxide ions.

In 1909 Sorenson devised a scale (known as pH scale) on which the strength of acid solutions as well as basic solutions could be represented by making use of the hydrogen ion concentrations in them. Sorensen linked the hydrogen ion concentrations of acid and base solutions to the simple numbers 0 to 14 on his pH scale. The pH of a solution is inversely proportional to the concentration of hydrogen ions in it.

pH may be defined as a number by which negative power of 10 has to be raised in order to express the concentration of hydrogen ion of the solution i.e., $[\text{H}^+] = 10^{-\text{pH}}$ where the concentration of H^+ ions is expressed as moles/litre and is written as $[\text{H}^+]$.

S. No.	Solution	pH limit
1.	Saliva	6.5-7.5
2.	Lemon juice	2.2-2.4
3.	Tomato juice	4.0-4.4
4.	Coffee	4.5-5.5

222. When drops of tomato juice are dropped on litmus paper than litmus paper will turn

- (a) red
- (b) yellow
- (c) green
- (d) black

To Purchase Hard Book of From Amazon Click Here.

For More Details Whatsapp at 8905629969

Sol : www.cbse.site/sc/bm293

223. The nature of saliva in given table is

- (a) acidic
- (b) basic
- (c) Neither acidic nor basic
- (d) cannot be define

Sol : www.cbse.site/sc/bm293

224. The effect of acid on litmus paper is

- (a) blue to red in colour
- (b) red to blue in colour
- (c) red to green in colour
- (d) green to red on colour

Sol : www.cbse.site/sc/bm293

225. The effect of base on litmus paper is

- (a) Turns red litmus to blue in colour
- (b) Turns blue litmus to blue in colour
- (c) Turns red litmus to orange
- (d) None of these

Sol : www.cbse.site/sc/bm293

226. The pH limit of coffee is

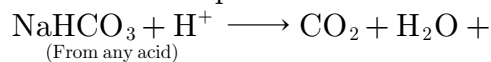
- (a) 4.5-5.5
- (b) 6.5-7.5
- (c) 1.4-2.5
- (d) 2.9-3.9

Sol : www.cbse.site/sc/bm293

Direction For Questions (228-232)

For making baking powder, which is a mixture of baking soda (sodium hydrogen carbonate) and a mild edible acid such as tartaric acid. When baking powder is heated or mixed in water, the following

reaction takes place:



Sodium salt of acid

Carbon dioxide produced during the reaction causes bread or cake to rise making them soft and spongy.

Sodium hydrogen carbonate is also an ingredient in antacids. Being alkaline, it neutralises excess acid in the stomach and provides relief.

It is also used in soda-acid fire extinguishers.

227. Which of the following compound is used in soda-acid fire extinguishers?

- (a) Plaster of Paris
- (b) Baking soda
- (c) Washing soda
- (d) Bleaching powder

Sol : www.cbse.site/sc/bm294

228. is the chemical name of baking soda.

- (a) Calcium hydrogen carbonate
- (b) Sodium hydrogen carbonate
- (c) Calcium carbonate
- (d) Sodium carbonate

Sol : www.cbse.site/sc/bm294

229. Baking powder is a mixture of the following compounds:

- (a) Bleaching powder and citric acid
- (b) Baking soda and oxalic acid
- (c) Washing soda and citric acid
- (d) Baking soda and tartaric acid

Sol : www.cbse.site/sc/bm294

230. Which ingredient is used in anti-acids which gives relief in stomach by neutralising excess acid?

- (a) Magnesium hydroxide

To Purchase Hard Book of From Amazon Click Here.

For More Details Whatsapp at 8905629969

- (b) Sodium carbonate
- (c) Aluminium hydroxide
- (d) Sodium hydrogen carbonate

Sol : www.cbse.site/sc/bm294

231. What is the nature of baking soda?

- (a) It is amphoteric
- (b) It is acidic
- (c) It is alkaline
- (d) It is neutral

Sol : www.cbse.site/sc/bm294

□□□□□□

Don't Take Printout of This File because this is not useful. You can purchase hard book from Amazon. Hard book includes explanation of all MCQs in print form.